

Combined Graduate Level Examination 2021 Tier - I

Roll Number	
Candidate Name	Dots Academy
Venue Name	
Exam Date	12/04/2022
Exam Time	12:30 PM - 1:30 PM
Subject	CGLE 2021 Tier I

Section : General Intelligence and Reasoning

Q.1 In a certain code language, 'so it be' is written as 'lor kor nor', 'it is done' is written as 'zor kor tor', and 'be yourself' is written as 'nor xor'. How will 'so' be written in that language?

- Ans 1. lor
 2. kor
 3. xor
 4. nor

Question ID : 65497843985
Status : Answered
Chosen Option : 1

Q.2 Seven friends, Subhi, Prince, Ketan, Vishal, Mahima, Krish and Naitik, are sitting around a circular table with their backs towards the centre. Subhi is sitting to the immediate right of Prince. Naitik and Krish are not sitting to the immediate left or right of Vishal. Vishal is sitting third to the left of Prince. Mahima is sitting to the immediate right of Vishal. Who is sitting third to the right of Prince?

- Ans 1. Naitik
 2. Krish
 3. Ketan
 4. Mahima

Dots Academy

Question ID : 65497842574
Status : Not Answered
Chosen Option : --

Q.3 Select the correct combination of mathematical signs that can sequentially replace the * signs and make the given equation correct.

$$88 * 120 * 42 * 240 * 48 * 2$$

- Ans 1. =, x, +, ÷, -
 2. +, ÷, -, =, x
 3. x, ÷, =, -, +
 4. =, -, +, ÷, x

Question ID : 65497842683
Status : Not Answered
Chosen Option : --

Q.4 Which two signs need to be interchanged to make the following equation correct?

$$23 + 84 \div 14 \times 8 - 3 = 5$$

- Ans
- 1. - and +
 - 2. + and ×
 - 3. ÷ and -
 - 4. - and ×

Question ID : 65497842581

Status : Not Answered

Chosen Option : --

Q.5 There are seven members, B, C, D, E, F, G and H, in a family. H is the only daughter-in-law of D. E is the sister of C. C is the only son of F, who is the wife of D. B and G are the sons of H. How is G related to F?

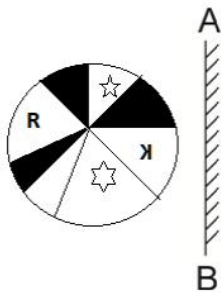
- Ans
- 1. Father
 - 2. Son
 - 3. Grandson
 - 4. Brother

Question ID : 65497842573

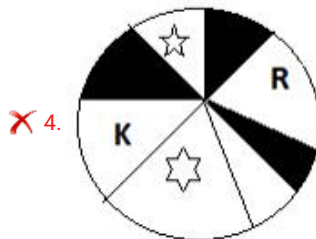
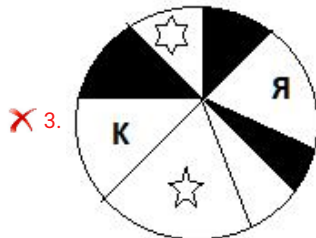
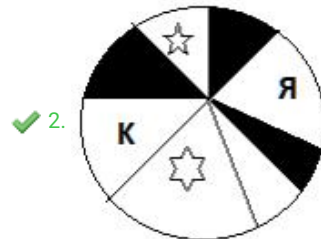
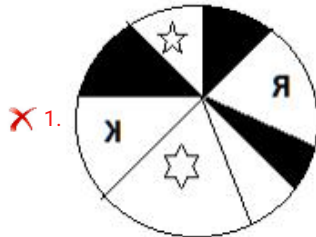
Status : Answered

Chosen Option : 3

Q.6 Select the correct mirror image of the given figure when the mirror is placed at 'AB' as shown.



Ans




Dots Academy

Question ID : 65497842587

Status : Answered

Chosen Option : 2

Q.7 Select the set of classes the relationship among which is best illustrated by the given Venn diagram.



- Ans
- 1. Potato, Peach, Vegetables
 - 2. Doctors, Singers, Extroverts
 - 3. Peso, Currency, Taka
 - 4. Natural numbers, Integers, Real numbers

Dots Academy

Question ID : 65497844407
Status : Answered
Chosen Option : 3

Q.8 Select the combination of letters that when sequentially placed in the blanks of the given series will complete the series.

j _ m b _ a _ _ u _ b _ a d j _ m _ b _ d

- Ans
- 1. u b m j m b u b a
 - 2. u b d j m b j b a
 - 3. u b d j m b u m a
 - 4. u b d j m b u b a

Question ID : 65497844638
Status : Answered
Chosen Option : 4

Q.9 A cube of side 80 cm is painted yellow on all the faces and then cut into smaller cubes of sides 8 cm each. Find the number of smaller cubes having all the three faces painted.

- Ans
- 1. 64
 - 2. 28
 - 3. 8
 - 4. 32

Question ID : 65497842686
Status : Not Answered
Chosen Option : --

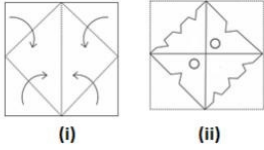
Q.10 Select the option that is related to the third term in the same way as the second term is related to the first term.

UPRIGHT : PUVEKTH :: DESTROY : ?

- Ans
- 1. EDWPVYO
 - 2. EDPXNYO
 - 3. EDWWUY
 - 4. DEWPVOY

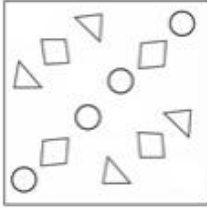
Question ID : 65497844386
Status : Answered
Chosen Option : 1

Q.11 The sequence of folding a piece of paper (figures i) and the manner in which the folded paper has been cut (figure ii) is shown in the following figures. Select the option that would most closely resemble the unfolded form of figure (ii).




Ans

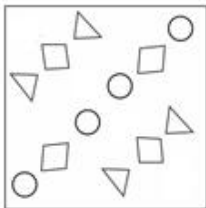
✓ 1.



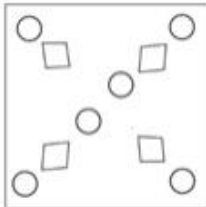
✗ 2.



✗ 3.



✗ 4.



Dots Academy

Question ID : 65497842891

Status : Answered

Chosen Option : 1

Q.12 Read the given statements and conclusions carefully. Assuming that the information given in the statements is true, even if it appears to be at variance with commonly known facts, decide which of the given conclusions logically follow from the statements.

Statements:

1. All flowers are blue.
2. All blue are good.
3. No good is red.

Conclusions:

- I. No red is a flower.
- II. No red is a bus.
- III. Some good are flowers.
- IV. Some good are blue.

Dots Academy

- Ans
- 1. Only conclusions I, II and IV follow
 - 2. All conclusions I, II, III and IV follow
 - 3. Only conclusions I and III follow
 - 4. Only conclusions I, III and IV follow

Question ID : 65497842676

Status : Answered

Chosen Option : 4

Q.13 Select the number from among the given options that can replace the question mark (?) in the following series.

28, 32, 41, 57, ?

- Ans
- 1. 74
 - 2. 68
 - 3. 82
 - 4. 90

Question ID : 65497842678

Status : Answered

Chosen Option : 3

Q.14 Select the option that is related to the third number in the same way as the second number is related to the first number and the sixth number is related to the fifth number.

3 : 17 :: 6 : ? :: 9 : 47

- Ans
- 1. 32
 - 2. 34
 - 3. 36
 - 4. 38

Question ID : 65497842881

Status : Answered

Chosen Option : 1

Q.15 Among five boxes A B C D and E B is thrice as heavy as A. C is 40 kg heavier than E. D is three and a half times as heavy as E and C is five times as heavy as A. The weight of E is 40 kg. Which object is the lightest of all and what is its weight?

- Ans
- 1. D 125 kg
 - 2. B 50 kg
 - 3. B 12 kg
 - 4. A 16 kg

Question ID : 65497844397
Status : Answered
Chosen Option : 4

Q.16 In a certain code language, 'TANKER' is written as 'VCPMGT', how will 'SOCRATES' be written in that language?

- Ans
- 1. UQETCVGU
 - 2. UQGTCVHU
 - 3. UQFTCVHU
 - 4. UQETCWGU

Question ID : 65497844635
Status : Answered
Chosen Option : 4

Q.17 Select the option that is embedded in the given figure (X) (rotation is NOT allowed).



(X)

Ans

- 1.
- 2.
- 3.
- 4.

Dots Academy

Question ID : 65497844000
Status : Answered
Chosen Option : 2

Q.18 Select the correct option that indicates the arrangement of the given words in a logical and meaningful order.

1. Chapterlist
2. Bibliography
3. Preface
4. Cover page
5. Chapters

Dots Academy

- Ans 1. 3, 5, 4, 2, 1
2. 4, 3, 1, 5, 2
3. 2, 5, 1, 4, 3
4. 4, 5, 3, 1, 2

Question ID : 65497843677
Status : Answered
Chosen Option : 2

Q.19 Select the number from among the given options that can replace the question mark (?) in the following series.

82, 105, 136, 177, 224, 283, ?

- Ans 1. 412
2. 349
3. 350
4. 320

Question ID : 65497843990
Status : Not Answered
Chosen Option : --


Q.20 Select the letter-cluster from among the given options that can replace the question mark (?) in the following series.

FCC, UFH, OIS, LLX, FOC, ?

- Ans 1. URH
2. TRF
3. VSG
4. WTH

Question ID : 65497842666
Status : Answered
Chosen Option : 1

Q.21 Which of the option figures when rotated 270° anticlockwise and then 45° clockwise will result in the given question figure?



Ans

✗ 1.



✗ 2.



✓ 3.



✗ 4.



Dots Academy

Question ID : 65497842886

Status : Not Answered

Chosen Option : --

Q.22 Four letter-clusters have been given, out of which three are alike in some manner and one is different. Select the letter-cluster that is different.

- Ans 1. HOVC
 2. DKRY
 3. CJQY
 4. MTAH

Question ID : 65497843981
Status : Not Answered
Chosen Option : --

Q.23 In a certain code language, 'PARK' is coded as '3749', and 'RACE' is coded as '4762'. How will 'CARE' be coded in that language?

- Ans 1. 7624
 2. 6742
 3. 7642
 4. 6724

Question ID : 65497842873
Status : Not Answered
Chosen Option : --

Q.24 Study the given pattern carefully and select the number from among the given options that can replace the question mark (?) in it.

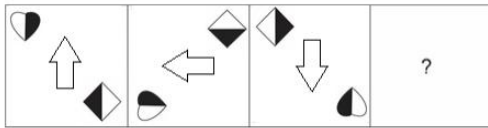
18 24 19
7 8 9
8 11 14
17 ? 14

- Ans 1. 21
 2. 30
 3. 15
 4. 38

Dots Academy

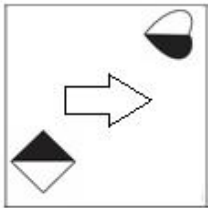
Question ID : 65497843994
Status : Not Answered
Chosen Option : --

Q.25 Select the figure from among the given options that can replace the question mark (?) in the following series.

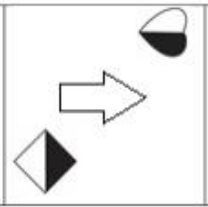


Ans

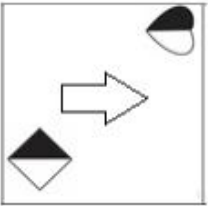
✓ 1.



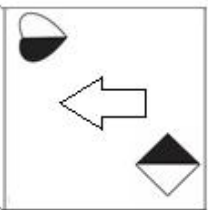
✗ 2.



✗ 3.



✗ 4.



Dots Academy

Question ID : 65497842584

Status : Not Answered

Chosen Option : --

Section : General Awareness

Q.1 In December 2020, _____ became the first country in the world to approve sale of lab-grown chicken products.

Ans ✗ 1. Japan

✗ 2. Vietnam

✗ 3. Taiwan

✓ 4. Singapore

Question ID : 65497842607

Status : Not Answered

Chosen Option : --

Q.2 *Camellia sinensis* is a plant that produces _____.

- Ans
- 1. coffee
 - 2. jute
 - 3. sugarcane
 - 4. tea

Question ID : 65497842703
Status : Answered
Chosen Option : 2

Q.3 Who among the following became the first Indian to win the Miss Deaf World title?

- Ans
- 1. Raghavi Shankar
 - 2. Vidisha Baliyan
 - 3. Arunima Sinha
 - 4. Preethi Srinivasan

Question ID : 65497844427
Status : Not Answered
Chosen Option : --

Q.4 Which of the following statements is/are correct?

- I- Karnataka is the largest producer of coffee in India.
- II- Arabica is a variety of coffee.
- III- The Arabica variety initially brought from Mexico is produced in India.

- Ans
- 1. I, II and III
 - 2. Only I and II
 - 3. Only II and III
 - 4. Only III

Dots Academy

Question ID : 65497844017
Status : Not Answered
Chosen Option : --

Q.5 What is the emigration of a significant proportion of a country's highly skilled, highly educated professional population to other countries offering better economic and social opportunities called?

- Ans
- 1. Demographic transition
 - 2. Closed population
 - 3. Brain drain
 - 4. Carrying capacity

Question ID : 65497842601
Status : Not Answered
Chosen Option : --

Q.6 What was the first name of the Mughal Emperor Babur?

- Ans
- 1. Hasanuddin
 - 2. Zahiruddin
 - 3. Giasuddin
 - 4. Qaseemuddin

Question ID : 65497844018
Status : Answered
Chosen Option : 2

Q.7 _____ is concerned with constructing records of past climates and climatic events by analysis of tree growth characteristics, especially growth rings.

- Ans
- 1. Historical- climatology
 - 2. Bioclimatology
 - 3. Geo climatology
 - 4. Dendroclimatology

Dots Academy

Question ID : 65497842696
Status : Not Answered
Chosen Option : --

Q.8 Who among the following is the author of the novel 'Q and A'?

- Ans
- 1. MK Rasgotra
 - 2. Muchkund Dubey
 - 3. JN Dixit
 - 4. Vikas Swarup

Question ID : 65497842911
Status : Not Answered
Chosen Option : --

Q.9 An amendment to the Hindu Succession Act, 1956 was passed in the year _____.

- Ans
- 1. 2012
 - 2. 2010
 - 3. 2005
 - 4. 2008

Question ID : 65497842611
Status : Not Answered
Chosen Option : --

Q.10 Which of the following dwarf planets lies in the main asteroid belt?

- Ans
- 1. Eris
 - 2. Haumea
 - 3. Makemake
 - 4. Ceres

Question ID : 65497844010
Status : Answered
Chosen Option : 4

Q.11 What was the age in years of the revolutionary Bhagat Singh when he was hanged till death?

- Ans 1. 23
 2. 26
 3. 20
 4. 30

Question ID : 65497842909
Status : Answered
Chosen Option : 2

Q.12 Who among the following female wrestlers won the Ukraine Wrestling Tournament in February 2021?

- Ans 1. Babita Kumari
 2. Sakshi Malik
 3. Kavita Devi
 4. Vinesh Phogat

Question ID : 65497844432
Status : Not Answered
Chosen Option : --

Q.13 Which of the following Sustainable Development Goals (SDG) seeks to 'Protect, restore and promote sustainable use of terrestrial ecosystems, sustainably manage forests, combat desertification, and halt and reverse land degradation and halt biodiversity loss'?

- Ans 1. SDG 15
 2. SDG 17
 3. SDG 7
 4. SDG12

Question ID : 65497842900
Status : Not Answered
Chosen Option : --

Q.14 As per the Economic Survey, 2020, how many banks of India are there in the list of the top global 100?

- Ans 1. One
 2. Three
 3. None
 4. Two

Dots Academy

Question ID : 65497844411
Status : Not Answered
Chosen Option : --

Q.15 From which of the following English words is the name 'Bhangra' derived in the context of Bhangra Dance?

- Ans 1. Rhythm
 2. Movement
 3. Style
 4. Hemp

Question ID : 65497844004
Status : Answered
Chosen Option : 3

Q.16 Which of the following Amendments of the Constitution of India gave the status of state to Goa?

- Ans 1. 59th Amendment
 2. 48th Amendment
 3. 52nd Amendment
 4. 56th Amendment

Question ID : 65497844026
Status : Answered
Chosen Option : 4

Q.17 Which of the following revolutionaries was arrested by the British as an accused in the Alipore Bomb Conspiracy Case?

- Ans 1. Kanailal Dutta
 2. Roshan Singh
 3. Ashfaq Ullah Khan
 4. Rajendra Lahiri

Dots Academy

Question ID : 65497842706
Status : Not Answered
Chosen Option : --

Q.18 In which year had India's ratio of public debt to GDP gone up to a record 84.2%?

- Ans 1. 2001
 2. 2003
 3. 1991
 4. 1999

Question ID : 65497842594
Status : Not Answered
Chosen Option : --

Q.19 What is the repo rate given by the Reserve Bank of India's (RBI) Monetary Policy Committee (MPC) as on 7 April 2021?

- Ans
- 1. 3%
 - 2. 2%
 - 3. 5%
 - 4. 4%

Question ID : 65497842895
Status : Answered
Chosen Option : 3

Q.20 Which of the following is a characteristic of permanent tissue?

- Ans
- 1. Vacuoles are absent
 - 2. Inorganic inclusions are absent
 - 3. Cells divide repeatedly
 - 4. Intercellular spaces are present

Question ID : 65497842599
Status : Not Answered
Chosen Option : --

Q.21 In which city of Gujarat will you find the Uparkot Buddhist Caves?

- Ans
- 1. Anand
 - 2. Vadodara
 - 3. Bhavnagar
 - 4. Junagadh

Question ID : 65497842692
Status : Answered
Chosen Option : 4

Q.22 As of April 2021, who among the following is the only Indian long jumper to have qualified for the Tokyo Olympics 2021?

- Ans
- 1. Sanjay Kumar Rai
 - 2. TC Yohannan
 - 3. Sreeshankar Murali
 - 4. Virsa Singh

Dots Academy

Question ID : 65497842714
Status : Not Answered
Chosen Option : --

Q.23 Which of the following laws deduces the expression for the force between two stationary point charges in vacuum or free space?

- Ans 1. Coulomb's Law
 2. Ohm's Law
 3. Gauss' Law
 4. Lenz's Law

Question ID : 65497844416
Status : Answered
Chosen Option : 1

Q.24 Which of the following elements is NOT suitable for the fabrication of a light emitting diode structure?

- Ans 1. Germanium
 2. Indium gallium nitride
 3. Gallium arsenide
 4. Gallium phosphide

Question ID : 65497844418
Status : Answered
Chosen Option : 2

Q.25 In which of the following years was an Act to provide for the reorganisation of the states of India and for matters connected therewith enacted?

- Ans 1. 1956
 2. 1962
 3. 1959
 4. 1947

Dots Academy

Question ID : 65497842913
Status : Not Answered
Chosen Option : --

Section : Quantitative Aptitude

Q.1 A can complete 25% of a work in 15 days. He works for 15 days and then B alone finishes the remaining work in 30 days. In how many days will A and B working together finish 50% of the same work?

- Ans 1. 24
 2. 12
 3. 25
 4. 20

Question ID : 65497842624
Status : Not Answered
Chosen Option : --

Q.2 A shopkeeper marks his goods at a price 20% higher than their cost price and allows 10% discount on every item. Find his gain percentage.

- Ans**
- 1. 10.5%
 - 2. 10%
 - 3. 8%
 - 4. 9%

Dots Academy

Question ID : 65497843528
Status : Not Answered
Chosen Option : --

Q.3 The value of $40 \div 5$ of $2 \times [18 \div 6 \times (12 - 9)$ of $5 - (3 - 8)] \div 25$ is:

- Ans**
- 1. 8
 - 2. 7
 - 3. 4
 - 4. 5

Question ID : 65497844435
Status : Answered
Chosen Option : 1

Q.4 $\frac{11}{5}$ of a number A is 22% of a number B. The number B is equal to 2.5% of a third number C. If the value of C is 5500, then the sum of 80% of A and 40% of B is:

- Ans**
- 1. 88
 - 2. 48
 - 3. 75
 - 4. 66

Question ID : 65497842721
Status : Not Answered
Chosen Option : --

Q.5 The cost prices of two articles A and B are in the ratio 4 : 5. While selling these articles, the shopkeeper gains 10% on article A and 20% on article B and the difference in their selling prices is ₹480. The difference in the cost price (in ₹) of articles B and A is:

- Ans**
- 1. 300
 - 2. 250
 - 3. 400
 - 4. 350

Question ID : 65497842621
Status : Not Answered
Chosen Option : --

Q.6

The value of $1 + \sqrt{\frac{\cot \theta + \cos \theta}{\cot \theta - \cos \theta}}$, if $0^\circ < \theta < 90^\circ$, is equal to:

- Ans
- 1. $1 + \sec \theta - \tan \theta$
 - 2. $1 + \sec \theta + \tan \theta$
 - 3. $1 - \sec \theta + \tan \theta$
 - 4. $1 - \sec \theta - \tan \theta$

Question ID : 65497842936

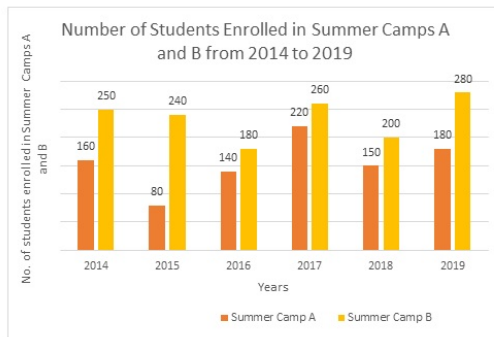
Status : Not Answered

Chosen Option : --

Q.7

The following bar chart shows the number of students enrolled in two Summer Camps A and B from 2014 to 2019.

Study the chart carefully and answer the question that follows.



Dots Academy

The number of students enrolled in Camp A in 2016 and 2019 together is what percentage of the number of students enrolled in Camp B in 2015 and 2017 together?

- Ans
- 1. 75%
 - 2. 80%
 - 3. 60%
 - 4. 64%

Question ID : 65497843141

Status : Not Answered

Chosen Option : --

Q.8

If $8A5146B$ is divisible by 88, then what is the value of $B - A$?

- Ans
- 1. -1
 - 2. 1
 - 3. 2
 - 4. 0

Question ID : 65497842716

Status : Not Answered

Chosen Option : --

Q.9 If $a^2 + b^2 + 49c^2 + 18 = 2(b - 28c - a)$ then the value of $(a + b - 7c)$ is:

- Ans
- 1. 2
 - 2. 3
 - 3. 4
 - 4. 1

Question ID : 65497842931
Status : Not Answered
Chosen Option : --

Q.10 A and B started their journeys from X to Y and Y to X, respectively. After crossing each other, A and B completed remaining parts of their journeys in $6\frac{1}{8}$ hours and 8 hours, respectively. If the speed of A is 32 km/h, then the speed, in km/h, of B is:

- Ans
- 1. 30
 - 2. 28
 - 3. 21
 - 4. 25

Question ID : 65497842928
Status : Not Answered
Chosen Option : --

Q.11 The angle of elevation of the top of a tall building from the points M and N at the distances of 72 m and 128 m, respectively, from the base of the building and in the same straight line with it, are complementary. The height of the building (in m) is:

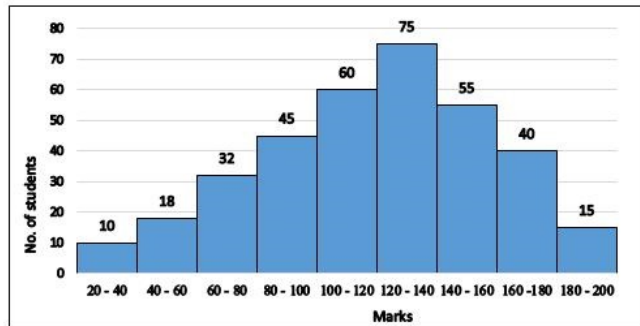
- Ans
- 1. 96
 - 2. 90
 - 3. 84
 - 4. 80

Dots Academy

Question ID : 65497844453
Status : Not Answered
Chosen Option : --

- Q.12 The given histogram represents the marks of students in Mathematics test of a certain class.
The total number of students is 350 and the maximum marks of the test are 200.

Study the graph and answer the question that follows.



Dots Academy

What is the class average (correct up to one place of decimal) of mathematics test?

- Ans
- 1. 123.7
 - 2. 127.3
 - 3. 115.8
 - 4. 119.3

Question ID : 65497844053
Status : Not Answered
Chosen Option : --

- Q.13 In $\triangle ABC$, $\angle A = 88^\circ$. If I is the incentre of the triangle, then the measure of $\angle BIC$ is:

- Ans
- 1. 68°
 - 2. 134°
 - 3. 112°
 - 4. 56°

Question ID : 65497842632
Status : Not Answered
Chosen Option : --

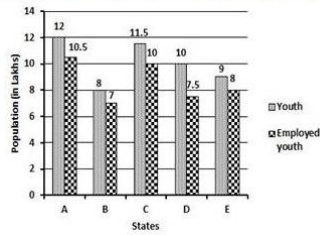
- Q.14 If $a + b + c = 6$, $a^2 + b^2 + c^2 = 32$, and $a^3 + b^3 + c^3 = 189$, then the value of $abc - 3$ is:

- Ans
- 1. 2
 - 2. 3
 - 3. 1
 - 4. 0

Question ID : 65497842627
Status : Not Answered
Chosen Option : --

Q.15 The following bar graph shows the number of youth (in lakhs) and the number of employed youth (in lakhs) in 5 states A, B, C, D and E.

In which state(s) is the number of youth more than the average number of youth in the five states?



Dots Academy

- Ans**
- 1. A, C, D, E
 - 2. A, C, D
 - 3. A
 - 4. A, C

Question ID : 65497843545
 Status : Answered
 Chosen Option : 4

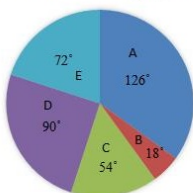
Q.16 A cyclic quadrilateral ABCD is drawn in a circle with centre O. A and C are joined to O. If $\angle ABC = 2p$ and $\angle ADC = 3p$, what is the measure (in degrees) of the $\angle AOC$ reflex?

- Ans**
- 1. 216
 - 2. 200
 - 3. 245
 - 4. 210

Question ID : 65497844043
 Status : Not Answered
 Chosen Option : --

Q.17 The breakup of the total number of employees of a company working in different offices (A to E), in degrees, is given in the pie chart.

Total number of employees = 2400.



In which office is the number of employees 600?

- Ans**
- 1. E
 - 2. D
 - 3. A
 - 4. C

Question ID : 65497844455
 Status : Not Answered
 Chosen Option : --

Q.18 Sides AB and AC of $\triangle ABC$ are produced to points D and E, respectively. The bisectors of $\angle CBD$ and $\angle BCE$ meet at P.
If $\angle A = 78^\circ$, then the measure of $\angle P$ is:

- Ans
- 1. 56°
 - 2. 55°
 - 3. 51°
 - 4. 61°

Question ID : 65497842934
Status : Not Answered
Chosen Option : --

Q.19 In a quadrilateral ABCD, the bisectors of $\angle C$ and $\angle D$ meet at point E. If $\angle CED = 57^\circ$ and $\angle A = 47^\circ$, then the measure of $\angle B$ is:

- Ans
- 1. 67°
 - 2. 47°
 - 3. 77°
 - 4. 57°

Question ID : 65497842731
Status : Not Answered
Chosen Option : --

Q.20 If the volume of a sphere is equal to that of a cylinder having the same radius, then find the ratio of the radius to the height of the cylinder.

- Ans
- 1. 1 : 2
 - 2. 2 : 3
 - 3. 3 : 4
 - 4. 3 : 5

Dots Academy

Question ID : 65497844653
Status : Answered
Chosen Option : 2

Q.21 What is the average of all the prime numbers between 70 and 90?

- Ans
- 1. 81.6
 - 2. 80
 - 3. 78.66
 - 4. 79

Question ID : 65497844655
Status : Not Answered
Chosen Option : --

Q.22

The value of $\left(\frac{1-\cot\theta}{1-\tan\theta}\right)^2 - 1$ when $0^\circ < \theta < 90^\circ$, is equal to:

- Ans
- 1. $\cos^2 \theta - 1$
 - 2. $\sin^2 \theta - 1$
 - 3. $\cot^2 \theta - 1$
 - 4. $\sec^2 \theta + 1$

Question ID : 65497842634

Status : Not Answered

Chosen Option : --

Q.23 The simple interest on a certain sum is one-eighth of the sum when the number of years is equal to half of the rate percentage per annum. Find the simple interest (in ₹) on ₹15,000 at the same rate of simple interest for 8 years.

- Ans
- 1. 5,000
 - 2. 6,000
 - 3. 5,800
 - 4. 5,250

Dots Academy

Question ID : 65497844037

Status : Not Answered

Chosen Option : --

Q.24 Six bells begin to toll together and toll, respectively, at intervals of 3, 4, 6, 7, 8 and 12 seconds. After how many seconds, will they toll together again?

- Ans
- 1. 167
 - 2. 186
 - 3. 168
 - 4. 176

Question ID : 65497844434

Status : Answered

Chosen Option : 3

Q.25 A and B start a business. A invests $33\frac{1}{3}\%$ of the total capital and B invests the remaining. If the total profit at the end of the year is ₹1,62,000, then B's share (in ₹) is:

- Ans
- 1. 54,000
 - 2. 1,12,000
 - 3. 1,08,000
 - 4. 1,20,000

Question ID : 65497842925

Status : Not Answered

Chosen Option : --

Q.1 Select the most appropriate meaning of the given idiom.

A long shot

- Ans
- 1. A perfect aim
 - 2. A correct prediction
 - 3. Very profitable
 - 4. Little chance of success

Dots Academy

Question ID : 65497842761
Status : Answered
Chosen Option : 2

Q.2 Select the option that expresses the given sentence in reported speech.

She said, "It is too good to be true."

- Ans
- 1. She is saying that it is too good to be true.
 - 2. She said it were too good to be true.
 - 3. She said that it was too good to be true.
 - 4. She says that it is too good to be true.

Question ID : 65497844066
Status : Answered
Chosen Option : 3

Q.3 Select the option that can be used as a one-word substitute for the given group of words.

Showing great attention to detail and correct behaviour

- Ans
- 1. Punctilious
 - 2. Zealous
 - 3. Disciplined
 - 4. Punctual

Question ID : 65497842663
Status : Answered
Chosen Option : 3

Q.4 Select the most appropriate synonym of the given word.

Inscrutable

- Ans
- 1. Indelible
 - 2. Incredible
 - 3. Inevitable
 - 4. Inexplicable

Question ID : 65497842960
Status : Not Answered
Chosen Option : --

Q.5 Select the most appropriate ANTONYM of the given word.

Optional

- Ans 1. Elective
 2. Voluntary
 3. Arbitrary
 4. Compulsory

Dots Academy

Question ID : 65497844073
Status : Answered
Chosen Option : 4

Q.6 Select the most appropriate meaning of the given idiom.

On the wane

- Ans 1. On the top
 2. On the rise
 3. On the decline
 4. On the way

Question ID : 65497844075
Status : Not Answered
Chosen Option : --

Q.7 Sentences of a paragraph are given below in jumbled order. Arrange the sentences in the correct order to form a meaningful and coherent paragraph.

- A. The interest rates offered depends on the bank, deposit amount and the tenure you choose.
B. It not only helps you to save money but also helps you to earn a substantial interest on it.
C. One of the best ways to secure your money is by investing in fixed deposits.
D. Under the fixed deposit scheme, the depositor deposits the money only once at the time of opening the account.

- Ans 1. CABD
 2. ACBD
 3. ADCB
 4. CDBA

Question ID : 65497844473
Status : Answered
Chosen Option : 4

Q.8 Select the most appropriate synonym of the given word.

FLUKE

- Ans 1. Chance
 2. Plan
 3. Contract
 4. Policy

Question ID : 65497844474
Status : Answered
Chosen Option : 1

Q.9 The following sentence has been split into four segments. Identify the segment that contains a grammatical error.

This is / too grave sin / to be / pardoned.

- Ans 1. too grave sin
 2. to be
 3. pardoned
 4. This is

Dots Academy

Question ID : 65497842945
Status : Not Answered
Chosen Option : --

Q.10 The following sentence has been split into four segments. Identify the segment that contains a grammatical error.

She persisted / to doing / what she wanted / despite opposition.

- Ans 1. She persisted
 2. what she wanted
 3. to doing
 4. despite opposition

Question ID : 65497844057
Status : Answered
Chosen Option : 3

Q.11 The following sentence has been divided into parts. One of them may contain an error. Select the part that contains the error from the given options. If you don't find any error, mark 'No error' as your answer.

The unseasonal rain/ caused a lot of damage/ to the crops.

- Ans 1. The unseasonal rain
 2. caused a lot of damage
 3. No error
 4. to the crops

Question ID : 65497843449
Status : Not Answered
Chosen Option : --

Q.12 Select the INCORRECTLY spelt word.

- Ans 1. Whitan
 2. Brighten
 3. Hasten
 4. Enlighten

Question ID : 65497842967
Status : Answered
Chosen Option : 1

Q.13 Select the most appropriate option to fill in the blank.

Are you looking forward _____ Nikhil again?

- Ans
- 1. seeing
 - 2. to seeing
 - 3. to be seeing
 - 4. to see

Dots Academy

Question ID : 65497842665
Status : Answered
Chosen Option : 4

Q.14 Select the most appropriate option that can substitute the underlined segment in the given sentence. If there is no need to substitute it, select 'No substitution required'.

The investigation revealed that both of them had given false information to obtain the certificates.

- Ans
- 1. revealed that both of them
 - 2. reveal that them both
 - 3. No substitution required
 - 4. reveals that how they both

Question ID : 65497844472
Status : Answered
Chosen Option : 1

Q.15 Select the correct active voice of the given sentence.

The poems of great English poets are being translated into other languages.

- Ans
- 1. They translated the poems of great English poets into other languages.
 - 2. They have translated the poems of great English poets into other languages.
 - 3. They were translating the poems of great English poets into other languages.
 - 4. They are translating the poems of great English poets into other languages.

Question ID : 65497842948
Status : Not Answered
Chosen Option : --

Q.16 Select the option that can be used as a one-word substitute for the given group of words.

A fictional being from another world

- Ans
- 1. Alien
 - 2. Foreigner
 - 3. Stranger
 - 4. Native

Question ID : 65497842965
Status : Answered
Chosen Option : 1

Q.17 Select the option that expresses the given sentence in passive voice.

He opened the door for his mother.

- Ans
- 1. The door is opened by him for his mother.
 - 2. The door was open by him for his mother.
 - 3. The door had been opened by him for his mother.
 - 4. The door was opened by him for his mother.

Dots Academy

Question ID : 65497844462
Status : Answered
Chosen Option : 4

Q.18 Select the most appropriate ANTONYM of the given word.

Prey

- Ans
- 1. Loot
 - 2. Game
 - 3. Predator
 - 4. Sufferer

Question ID : 65497842759
Status : Answered
Chosen Option : 3

Q.19 The following sentence has been divided into parts. One of them may contain a grammatical error. Select the part that contains the error from the given options. If you don't find any error, mark 'No error' as your answer.

Antique diamond necklace / was stolen / from the museum.

- Ans
- 1. No error
 - 2. Antique diamond necklace
 - 3. from the museum
 - 4. was stolen

Question ID : 65497842338
Status : Not Answered
Chosen Option : --

Q.20 Select the option that will improve the underlined part of the given sentence. In case no improvement is needed, select 'No improvement required'.

I have been wondering at taking skating as a hobby.

- Ans
- 1. to take up
 - 2. about taking up
 - 3. on taking to
 - 4. No improvement required

Question ID : 65497842754
Status : Not Answered
Chosen Option : --

Comprehension:

In the following passage, some words have been deleted. Read the passage carefully and select the most appropriate option to fill in each blank.

Marie was born in 1867 in Warsaw, Poland. At an (1)_____ age, she displayed a brilliant mind and a (2)_____ personality. Her great exuberance for learning (3)_____ her to study further. However, she became (4)_____ when she learned that the university was closed (5)_____ women. Determined to receive a higher education, she joined a French university.

SubQuestion No : 21

Q.21 Select the most appropriate option to fill in blank no. 1.

- Ans
- 1. ignorant
 - 2. infant
 - 3. young
 - 4. early

Question ID : 65497842647

Status : Answered

Chosen Option : 3

Comprehension:

In the following passage, some words have been deleted. Read the passage carefully and select the most appropriate option to fill in each blank.

Marie was born in 1867 in Warsaw, Poland. At an (1)_____ age, she displayed a brilliant mind and a (2)_____ personality. Her great exuberance for learning (3)_____ her to study further. However, she became (4)_____ when she learned that the university was closed (5)_____ women. Determined to receive a higher education, she joined a French university.

SubQuestion No : 22

Q.22 Select the most appropriate option to fill in blank no. 2.

- Ans
- 1. brutal
 - 2. bruised
 - 3. bloated
 - 4. blithe

Dots Academy

Question ID : 65497842648

Status : Not Answered

Chosen Option : --

Comprehension:

In the following passage, some words have been deleted. Read the passage carefully and select the most appropriate option to fill in each blank.

Marie was born in 1867 in Warsaw, Poland. At an (1)_____ age, she displayed a brilliant mind and a (2)_____ personality. Her great exuberance for learning (3)_____ her to study further. However, she became (4)_____ when she learned that the university was closed (5)_____ women. Determined to receive a higher education, she joined a French university.

SubQuestion No : 23

Q.23 Select the most appropriate option to fill in blank no. 3.

Ans 1. promised

2. prompted

3. proposed

4. projected

Question ID : 65497842649

Status : Answered

Chosen Option : 2

Comprehension:

In the following passage, some words have been deleted. Read the passage carefully and select the most appropriate option to fill in each blank.

Marie was born in 1867 in Warsaw, Poland. At an (1)_____ age, she displayed a brilliant mind and a (2)_____ personality. Her great exuberance for learning (3)_____ her to study further. However, she became (4)_____ when she learned that the university was closed (5)_____ women. Determined to receive a higher education, she joined a French university.

SubQuestion No : 24

Q.24 Select the most appropriate option to fill in blank no. 4.

Ans 1. disfigured

2. disgruntled

3. dishevelled

4. distinguished

Dots Academy

Question ID : 65497842650

Status : Answered

Chosen Option : 3

Comprehension:

In the following passage, some words have been deleted. Read the passage carefully and select the most appropriate option to fill in each blank.

Marie was born in 1867 in Warsaw, Poland. At an (1)_____ age, she displayed a brilliant mind and a (2)_____ personality. Her great exuberance for learning (3)_____ her to study further. However, she became (4)_____ when she learned that the university was closed (5)_____ women. Determined to receive a higher education, she joined a French university.

SubQuestion No : 25

Q.25 Select the most appropriate option to fill in blank no. 5.

Ans 1. to

2. from

3. by

4. at

Question ID : **65497842651**

Status : **Not Answered**

Chosen Option : --