

Combined Graduate Level Examination 2021 Tier - I

Roll Number	
Candidate Name	Dots Academy
Venue Name	
Exam Date	18/04/2022
Exam Time	4:00 PM - 5:00 PM
Subject	CGLE 2021 Tier I

Section : General Intelligence and Reasoning

Q.1 Study the given pattern carefully and select the number that can replace the question mark (?) in it.

60 152 161
14 18 17
15 19 ?

- Ans
- 1. 13
 - 2. 23
 - 3. 7
 - 4. 19

Dots Academy

Question ID : 65497844196
Status : Not Answered
Chosen Option : --

Q.2 If 'sky' is called 'cloud', 'cloud' is called 'thunder', 'thunder' is called 'water', 'water' is called 'pot', 'pot' is called 'desert', and 'desert' is called 'sky', then where do fish live?

- Ans
- 1. pot
 - 2. cloud
 - 3. desert
 - 4. water

Question ID : 65497844187
Status : Answered
Chosen Option : 1

Q.3 If 'A' denotes 'addition', 'B' denotes 'multiplication', 'C' denotes 'subtraction', and 'D' denotes 'division', then what will be the value of the following expression?

441 D 7 A 21 B 6 C (189 D 7) A (46 C 12)

- Ans
- 1. 169
 - 2. 158
 - 3. 185
 - 4. 196

Question ID : 65497844298
Status : Not Answered
Chosen Option : --

Q.4 Jahnvi is the sister of Taruni. Taruni is married to Dilip. Dilip is the father of Raghu. Manoj is the son of Hema. Taruni is the mother-in-law of Hema. Dilip has only one son and no daughter. Jahnvi is married to Barun. Lekha is the daughter of Barun.
How is Jahnvi's sister related to Manoj's paternal grandfather?

- Ans
- 1. Mother
 - 2. Sister
 - 3. Wife
 - 4. Mother-in-law

Dots Academy

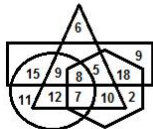
Question ID : 65497844290
Status : Answered
Chosen Option : 3

Q.5 In a certain code language 'TEDIOUS' is written as 'HAMKWPY'. How will 'PROFUSE' be written in that language?

- Ans
- 1. IBSLVOY
 - 2. BISLOYV
 - 3. IBLSNXY
 - 4. AJLSOVY

Question ID : 65497844387
Status : Not Answered
Chosen Option : --

Q.6 In the following Venn diagram, the hexagon stands for 'captains', the triangle stands for 'girls', the rectangle stands for 'toppers', and the circle stands for 'social activists'. The given numbers represent the number of persons in that particular category.



How many girls are toppers and captains also?

- Ans
- 1. 15
 - 2. 17
 - 3. 15
 - 4. 13

Question ID : 65497843397
Status : Answered
Chosen Option : 4

Q.7 Select the correct mirror image of the given combination when the mirror is placed at 'PQ' as shown.

BRIGHTE N
P
|
Q

- Ans
- ✓ 1. NETHGIRB
 - ✗ 2. BBLCHEIEN
 - ✗ 3. NETHGIRB
 - ✗ 4. BRIGHTE N

Question ID : 65497844304
Status : Answered
Chosen Option : 1

Q.8 Select the option in which the given figure is embedded (rotation is NOT allowed).



- Ans
- ✗ 1.
 - ✗ 2.
 - ✗ 3.
 - ✓ 4.

Dots Academy

Question ID : 65497844202
Status : Answered
Chosen Option : 4

Q.9 Select the option that is related to the third term in the same way as the second term is related to the first term.

PRACTISE : ACEIPRST :: TECHNOLOGY : ?

- Ans
- ✗ 1. CEGHLNOPTY
 - ✗ 2. HCETONYGLO
 - ✗ 3. CEGLHOONTY
 - ✓ 4. CEGHLNOOTY

Question ID : 65497843376
Status : Not Answered
Chosen Option : --

Q.10 Select the correct combination of mathematical signs that can sequentially replace the * signs and make the given equation correct.

$$63 * 90 * 42 * 230 * 46 * 3$$

Ans 1. +, ÷, -, =, ×

2. =, -, +, ÷, ×

3. ×, ÷, =, -, +

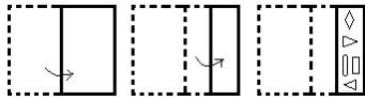
4. =, ×, +, ÷, -

Question ID : 65497842279

Status : Not Answered

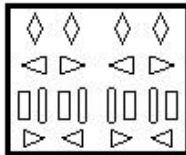
Chosen Option : --

Q.11 The sequence of folding a piece of paper and the manner in which the folded paper has been cut is shown in the following figures. How would this paper look when unfolded?

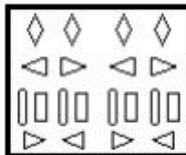


Ans

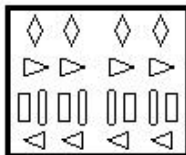
1.



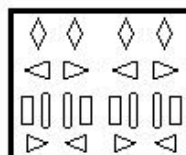
2.



3.



4.



Dots Academy

Question ID : 65497843699

Status : Answered

Chosen Option : 1

Q.12 Read the given statements and conclusions carefully. Assuming that the information given in the statements is true, even if it appears to be at variance with commonly known facts, decide which of the given conclusions logically follow from the statements.

Statements:

Some lions are tigers.
All tigers are leopards.
All lions are animals.

Conclusions:

I. Some animals are leopards.
II. Some leopards are lions.
III. Some animals are tigers.

- Ans**
- 1. Only conclusions I and III follow.
 - 2. Only conclusions I and II follow.
 - 3. Only conclusions II and III follow.
 - 4. All conclusions I, II and III follow.

Dots Academy

Question ID : 65497842272

Status : Answered

Chosen Option : 4

Q.13 Select the number from among the given options that can replace the question mark (?) in the following series.

2, 6, 10, 17, 52, 94, 472, ?

- Ans**
- 1. 816
 - 2. 763
 - 3. 736
 - 4. 861

Question ID : 65497844192

Status : Not Answered

Chosen Option : --

Q.14 At the time of sunset, Lopa and Kritika are sitting facing each other. If the shadow of Lopa falls to the right of Kritika, in which direction is Kritika facing?

- Ans**
- 1. East
 - 2. West
 - 3. North
 - 4. South

Question ID : 65497843694

Status : Not Answered

Chosen Option : --

Q.15 Select the correct option that indicates the arrangement of the given words in the order in which they appear in an English dictionary.

1. Likelihood
2. Likenesses
3. Likewise
4. Likens
5. Likeliest

- Ans 1. 5, 1, 2, 4, 3
 2. 1, 4, 2, 3, 5
 3. 5, 1, 4, 2, 3
 4. 5, 1, 2, 3, 4

Dots Academy

Question ID : 65497844599
Status : Answered
Chosen Option : 1

Q.16 Select the combination of letters that when sequentially placed in the blanks of the given series will complete the series.

d _ a _ b _ q d h _ a _ c q _ h _ a _ c q

- Ans 1. h a c a b d a b
 2. h a q a b d a b
 3. h a c a b d q b
 4. h a b a b d a b

Question ID : 65497844390
Status : Answered
Chosen Option : 1

Q.17 Select the option that is related to the third number in the same way as the second number is related to the first number and the sixth number is related to the fifth number.

16 : 263 :: 18 : ? :: 22 : 491

- Ans 1. 340
 2. 331
 3. 361
 4. 317

Question ID : 65497843689
Status : Answered
Chosen Option : 2

Q.18 A cube of side 12 cm is painted green on all the faces and then cut into smaller cubes of sides 2 cm each. Find the number of smaller cubes that have only one face painted.

- Ans 1. 49
 2. 96
 3. 68
 4. 78

Question ID : 65497842282
Status : Not Answered
Chosen Option : --

Q.19 What would be the ratio of the areas of two circles, i.e. Circle-A and Circle-B, the radius of which are 4 cm and 8 cm, respectively?

- Ans 1. 1 : 4
 2. 1 : 8
 3. 1 : 2
 4. 1 : 16

Question ID : 65497843387
Status : Answered
Chosen Option : 3

Q.20 Select the number from among the given options that can replace the question mark (?) in the following series.

578, 577, 568, 543, ?

- Ans 1. 532
 2. 518
 3. 494
 4. 528

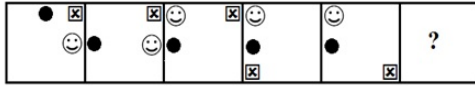
Question ID : 65497842274
Status : Not Answered
Chosen Option : --

Q.21 Four letter-clusters have been given, out of which three are alike in some manner and one is different. Select the letter-cluster that is different.

- Ans 1. JGLS
 2. FCHP
 3. WTYF
 4. NKPW

Question ID : 65497844183
Status : Answered
Chosen Option : 3

Q.22 Select the figure from among the given options that can replace the question mark (?) in the following series.




Ans


✗ 1.




✗ 2.



✗ 3.



✓ 4.



Dots Academy

Question ID : 65497844301

Status : Not Answered

Chosen Option : --

Q.23 In a certain code language, 'BHOPAL' is coded as '6-24-45-48-3-36', and 'IMPHAL' is coded as '27-39-48-24-3-36'. How will 'KOHIMA' be coded in that language?

Ans ✗ 1. 22-45-24-18-26-3

✗ 2. 33-30-24-18-39-9

✗ 3. 22-30-27-24-39-6

✓ 4. 33-45-24-27-39-3

Question ID : 65497843681

Status : Answered

Chosen Option : 4

Q.24 Anamika, Gopal, Nischal, Vanmayi, Shresta and Sripad are sitting in a straight line facing the north. Nischal is to the immediate left of Gopal. Shresta is between Anamika and Sripad. Sripad is at the second place from the right end. Four persons are sitting between Nischal and Vanmayi. If Gopal and Sripad interchange their positions, then who will be sitting between Vanmayi and Shresta?

Ans ✓ 1. Gopal

✗ 2. Sripad

✗ 3. Nischal

✗ 4. Anamika

Question ID : 65497844291

Status : Not Answered

Chosen Option : --

Q.25 Select the letter-cluster from among the given options that can replace the question mark (?) in the following series.

GKH, DNL, WQO, TTS, GWH, ?

- Ans
- 1. KZO
 - 2. DZL
 - 3. KYP
 - 4. FYP

Question ID : 65497842262
Status : Not Answered
Chosen Option : --

Section : General Awareness

Q.1 In the year _____, Indira Gandhi, the then Prime Minister of India, issued special stamps titled 'Wheat Revolution' to usher in the Green Revolution.

- Ans
- 1. 1943
 - 2. 1968
 - 3. 1987
 - 4. 1975

Question ID : 65497844219
Status : Not Answered
Chosen Option : --

Q.2 With reference to the administration of Delhi Sultanate, which of the following was the department of State Correspondence?

- Ans
- 1. Diwan-i-insha
 - 2. Diwan-i-khairat
 - 3. Diwan-i-risalt
 - 4. Diwan-i-arz

Question ID : 65497844220
Status : Not Answered
Chosen Option : --

Q.3 As per Economic Survey of India 2020-21, India is expected to have a Current Account Surplus of _____ of GDP in FY21.

- Ans
- 1. 3%
 - 2. 2%
 - 3. 1%
 - 4. 4%

Dots Academy

Question ID : 65497843401
Status : Not Answered
Chosen Option : --

Q.4 India lost a large proportion of _____ growing area to Pakistan during partition.

- Ans 1. soyabean
 2. cotton
 3. jute
 4. sunflower

Question ID : 65497842299
Status : **Not Answered**
Chosen Option : --

Q.5 Which Article of the Constitution of India prohibits anyone from employing children below the age of fourteen in factories, mines, etc?

- Ans 1. 24
 2. 23
 3. 26
 4. 25

Question ID : 65497844228
Status : **Answered**
Chosen Option : 2

Q.6 The 40th Amendment Act of 1976 was applied to which Article of the Constitution of India?

- Ans 1. 297
 2. 248
 3. 226
 4. 245

Dots Academy

Question ID : 65497844328
Status : **Not Answered**
Chosen Option : --

Q.7 Who among the following became the first Indian woman to score 10,000 runs in international cricket across all formats in March 2021?

- Ans 1. Priya Punia
 2. Jhulan Goswami
 3. Mithali Raj
 4. Taniya Bhatia

Question ID : 65497842310
Status : **Answered**
Chosen Option : 3

Q.8 'Ashtadhyayi', written by Sanskrit scholar Panini, is a book on _____.

- Ans 1. economy
 2. grammar
 3. medicine
 4. law

Question ID : 65497842302
Status : Not Answered
Chosen Option : --

Q.9 How many protons are there in a lithium nucleus?

- Ans 1. 3
 2. 4
 3. 2
 4. 5

Question ID : 65497843406
Status : Answered
Chosen Option : 1

Q.10 The Open Hand Monument in Chandigarh was designed by _____.

- Ans 1. Albert Mayer
 2. Matthew Nowicki
 3. Le Corbusier
 4. Maxwell Fry

Dots Academy

Question ID : 65497842288
Status : Not Answered
Chosen Option : --

Q.11 Which of the following does NOT come under the category of Public Goods?

- Ans 1. National defence
 2. Government administration
 3. Food items
 4. Roads

Question ID : 65497843703
Status : Answered
Chosen Option : 1

Q.12 The First Amendment Act of the Constitution of India came up in _____.

- Ans 1. 1951
 2. 1954
 3. 1953
 4. 1952

Question ID : 65497843721
Status : Answered
Chosen Option : 1

Q.13 Who among the following science fiction/ popular science writers wrote '2001 : A Space Odyssey' and held the position of a Professor at the Physical Research Laboratory, Ahmedabad?

- Ans
- 1. Arthur C Clarke
 - 2. Jules Verne
 - 3. HG Wells
 - 4. Isaac Asimov

Dots Academy

Question ID : 65497843417
Status : Not Answered
Chosen Option : --

Q.14 What is the study of the production and propagation of sound waves called?

- Ans
- 1. Optics
 - 2. Acoustics
 - 3. Astrophysics
 - 4. Photonics

Question ID : 65497844212
Status : Answered
Chosen Option : 2

Q.15 In October 2020, the Haryana Government launched a _____ under the Jal Jeevan Mission scheme.

- Ans
- 1. mobile app to test pH level in water
 - 2. training programme to test water salinity
 - 3. mobile water testing laboratory
 - 4. household water testing kit

Question ID : 65497842292
Status : Not Answered
Chosen Option : --

Q.16 Which of the following belongs to the family of 'Hominidae'?

- Ans
- 1. Housefly
 - 2. Man
 - 3. Mango
 - 4. Wheat

Question ID : 65497843408
Status : Answered
Chosen Option : 2

Q.17 What is the atomic mass of oxygen (expressed in 'u')?

- Ans 1. 32
 2. 16
 3. 8
 4. 24

Question ID : 65497843708
Status : Answered
Chosen Option : 2

Q.18 As per the press release dated September 2020 of the Government of India, what is the payment made by the Government of India at Minimum Support Price (MSP) rates in the last 6 years?

- Ans 1. ₹9 lakh crore
 2. ₹7 lakh crore
 3. ₹5 lakh crore
 4. ₹3 lakh crore

Dots Academy

Question ID : 65497844311
Status : Not Answered
Chosen Option : --

Q.19 Which of the following is the study of insects and their relationship to humans, the environment, and other organisms?

- Ans 1. Entomology
 2. Ethology
 3. Ornithology
 4. Mycology

Question ID : 65497844316
Status : Answered
Chosen Option : 1

Q.20 Which of the following is a dance form that originated in Assam?

- Ans 1. Gotipua
 2. Lavani
 3. Sattriya
 4. Chhau

Question ID : 65497844206
Status : Not Answered
Chosen Option : --

Q.21 Chandannagar was established as a French colony in 1673, obtaining permission from _____ the then Nawab of Bengal, to establish a trading post on the right bank of the river Hooghly.

- Ans
- 1. Ibrahim Khan
 - 2. Mir Zafar
 - 3. Murshid Quli Khan
 - 4. Mansur Ali Khan

Question ID : 65497843717
Status : Not Answered
Chosen Option : --

Q.22 Who among the following was the founder of the Indian Association for the Cultivation of Science?

- Ans
- 1. Mahendra Lal Sircar
 - 2. Ashutosh Mukhopadhyay
 - 3. Prafulla Chandra Roy
 - 4. Jagadish Chandra Bose

Dots Academy

Question ID : 65497843719
Status : Answered
Chosen Option : 3

Q.23 According to the 2011 Census of India, which of the following states has a population density of 17 persons per sq km?

- Ans
- 1. Nagaland
 - 2. Assam
 - 3. Sikkim
 - 4. Arunachal Pradesh

Question ID : 65497844318
Status : Answered
Chosen Option : 3

Q.24 Who among the following is the author of the book 'Mrs Funnybones'?

- Ans
- 1. Twinkle Khanna
 - 2. Rekha
 - 3. Sonali Bendre
 - 4. Juhi Chawla

Question ID : 65497844324
Status : Not Answered
Chosen Option : --

Q.25 Who among the following table tennis players won nine Senior National Championships as of April 2021?

- Ans
- 1. Sathiyar Gnanasekaran
 - 2. Sujay Ghorpade
 - 3. A Sharath Kamal
 - 4. Soumyajit Ghosh

Question ID : 65497843422
Status : Not Answered
Chosen Option : --

Section : Quantitative Aptitude

Q.1 If $A = 10^\circ$, what is the value of:

$$\frac{12 \sin 3A + 5 \cos (5A - 5^\circ)}{9 \sin \frac{9A}{2} - 4 \cos (5A + 10^\circ)}$$

Ans

- 1. $\frac{(9 - 2\sqrt{2})}{6\sqrt{2} + 5}$
- 2. $\frac{6\sqrt{2} + 5}{(9 + 2\sqrt{2})}$
- 3. $\frac{6\sqrt{2} + 5}{(9 - 2\sqrt{2})}$
- 4. $\frac{6\sqrt{2} - 5}{(9 - 2\sqrt{2})}$

Dots Academy

Question ID : 65497844351
Status : Answered
Chosen Option : 3

Q.2 A circle with centre O has radius 15 cm. D is a point on the circle such that a 24 cm long chord AB is bisected by OD at point C. Find the length of CD (in cm).

- Ans
- 1. 4
 - 2. 10
 - 3. 6
 - 4. 9

Question ID : 65497842327
Status : Not Answered
Chosen Option : --

Q.3 If the volume of a sphere is $4,851 \text{ cm}^3$, then what is its diameter (in cm)?

(Take $\pi = \frac{22}{7}$)

- Ans
- 1. 18
 - 2. 16
 - 3. 21
 - 4. 12

Dots Academy

Question ID : 65497844344
Status : Not Answered
Chosen Option : --

Q.4 A number 'n' when divided by 6 leaves remainder 2. What will be the remainder when $(n^2 + n + 2)$ is divided by 6?

- Ans
- 1. 0
 - 2. 4
 - 3. 2
 - 4. 6

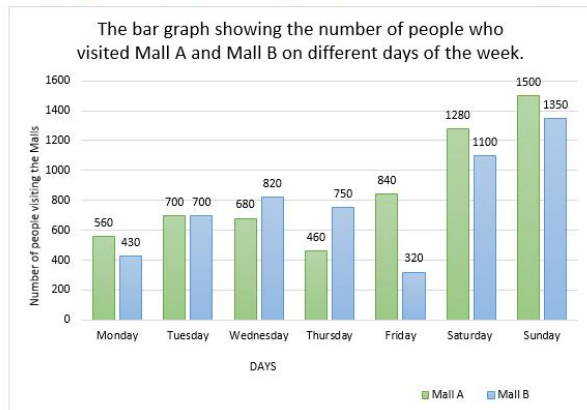
Question ID : 65497842312
Status : Not Answered
Chosen Option : --

Q.5 The average of a set of 18 consecutive integers is 22.5. What is the largest integer in the set?

- Ans
- 1. 31
 - 2. 13
 - 3. 17
 - 4. 14

Question ID : 65497844663
Status : Not Answered
Chosen Option : --

Q.6 The bar graph shows the number of people who visited Mall A and Mall B on different days of a week.



Dots Academy

The total number of people visiting Mall A on Monday, Tuesday, Friday and Sunday is what percentage of the total number of people visiting Mall B on Tuesday, Thursday, Saturday and Sunday? Express your answer correct to one place of decimal.

- Ans**
- 1. 82.4%
 - 2. 86.5%
 - 3. 92.3%
 - 4. 95.7%

Question ID : 65497843343

Status : Not Answered

Chosen Option : --

Q.7 If $\sqrt{x} - \frac{1}{\sqrt{x}} = \sqrt{3}$, then what is the value of $x^4 + \frac{1}{x^4}$?

- Ans**
- 1. 527
 - 2. 7
 - 3. 623
 - 4. 531

Question ID : 65497843739

Status : Not Answered

Chosen Option : --

Q.8 A manufacturer who marks the price of an article at ₹1,800, sells it to a dealer at a discount of 15%. The dealer gets a further discount of 8% on his net payment for paying in cash. What amount (to the nearest rupee) does the dealer pay to the manufacturer?

- Ans**
- 1. 1,378
 - 2. 1,408
 - 3. 1,530
 - 4. 1,500

Question ID : 65497843124

Status : Not Answered

Chosen Option : --

Q.9 In an election between two candidates, 5% of the registered voters did not cast their vote. 10% of the votes were found to be either invalid or of NOTA. The winning candidate received 60% votes in his favour and won the election by 17271 votes. Find the number of registered voters.

- Ans**
- 1. 100000
 - 2. 102500
 - 3. 101000
 - 4. 90525

Dots Academy

Question ID : 65497842317
Status : **Not Answered**
Chosen Option : --

Q.10 A shopkeeper earns a profit of 17% on selling a book at 10% discount on the printed price. If the cost price is ₹500, then the printed price (in ₹) is:

- Ans**
- 1. 615
 - 2. 650
 - 3. 750
 - 4. 585

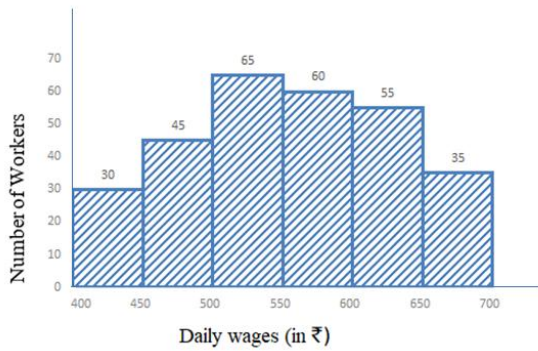
Question ID : 65497844338
Status : **Not Answered**
Chosen Option : --

Q.11 LCM of two numbers is 22 times their HCF. If one of the numbers is 132 and the sum of LCM and HCF is 276, then what is the other number?

- Ans**
- 1. 30
 - 2. 25
 - 3. 20
 - 4. 24

Question ID : 65497843424
Status : **Answered**
Chosen Option : 4

Q.12 Study the given histogram and answer the question that follows.



Dots Academy

The total number of workers whose daily wages are less than ₹500 is what percentage more than the total number of workers whose daily wages are ₹650 and above (correct to one decimal place)?

- Ans**
- 1. 111.8%
 - 2. 114.3%
 - 3. 101.2%
 - 4. 110.5%

Question ID : 65497844255
Status : Not Answered
Chosen Option : --

Q.13 Three years ago, the ratio of the age of father to that of his son was 8 : 3. After 4 years, their ages will be in the ratio 11 : 5. What is the present age (in years) of the father?

- Ans**
- 1. 48
 - 2. 52
 - 3. 51
 - 4. 55

Question ID : 65497843733
Status : Not Answered
Chosen Option : --

Q.14 From the top of a 195-m high cliff, the angles of depression of the top and bottom of a tower are 30° and 60° , respectively. Find the height of the tower (in m).

- Ans**
- 1. 65
 - 2. 195
 - 3. 130
 - 4. $195\sqrt{3}$

Question ID : 65497843443
Status : Not Answered
Chosen Option : --

Q.15 Monthly expenditure of a family on different heads is shown in the following pie chart. The family earns ₹1,08,000 every month.

How much (in ₹) does the family spend on food and transport?

Expenditure on different Heads



- Ans
- 1. 34,000
 - 2. 34,500
 - 3. 35,250
 - 4. 34,800

Dots Academy

Question ID : 65497843445
Status : Not Answered
Chosen Option : --

Q.16 If $2 \sin^2 \theta + 3 \cos \theta = 3$, $0^\circ < \theta < 90^\circ$, then the value of $(\sec^2 \theta + \cot^2 \theta)$ is

- Ans
- 1. $3\frac{2}{3}$
 - 2. $3\frac{1}{3}$
 - 3. $4\frac{1}{3}$
 - 4. $4\frac{1}{2}$

Question ID : 65497843744
Status : Not Answered
Chosen Option : --

Q.17 AB is a diameter of a circle with centre O. The tangent at a point C on the circle and AB, when produced, meet at the point P. If $\angle APC = 38^\circ$, then what is the measure of $\angle PCB$?

- Ans
- 1. 26°
 - 2. 23°
 - 3. 19°
 - 4. 29°

Question ID : 65497844245
Status : Not Answered
Chosen Option : --

Q.18 Anup can row 33 km downstream and 35 km upstream in 8 hours. He can also row 44 km downstream and 28 km upstream in the same time. How much time (in hours) will he take to row 55 km downstream and 14 km upstream?

- Ans
- 1. 7
 - 2. 9
 - 3. 6
 - 4. 8

Question ID : 65497843736
Status : Not Answered
Chosen Option : --

Q.19 The area of a cardboard (in cm^2) needed to make a closed box of size $20 \text{ cm} \times 10 \text{ cm} \times 8 \text{ cm}$ will be:

- Ans
- 1. 880
 - 2. 750
 - 3. 960
 - 4. 690

Question ID : 65497844661
Status : Not Answered
Chosen Option : --

Q.20 Find the value of the following expression:

$$\frac{3 \div 1 \times 2 + 5 - 2}{3 \times 3 - 2}$$

- Ans
- 1. $\frac{19}{3}$
 - 2. $\frac{4}{3}$
 - 3. $\frac{4}{7}$
 - 4. $\frac{9}{7}$

Dots Academy

Question ID : 65497843425
Status : Answered
Chosen Option : 4

Q.21 In ΔPQR , S is a point on the side QR such that PS is the bisector of $\angle QPR$. If $PQ = 12$ cm, $QS = 3$ cm and $QR = 7$ cm, then what is the length of side PR?

- Ans**
- 1. 16 cm
 - 2. 15 cm
 - 3. 14 cm
 - 4. 18 cm

Question ID : 65497844349
Status : **Not Answered**
Chosen Option : --

Q.22 A can do a certain work in 15 days, while B can do the same work in 21 days. If they work together, then in how many days will the same work be completed?

- Ans**
- 1. $7\frac{3}{4}$
 - 2. $9\frac{3}{4}$
 - 3. $8\frac{3}{4}$
 - 4. $6\frac{3}{4}$

Dots Academy

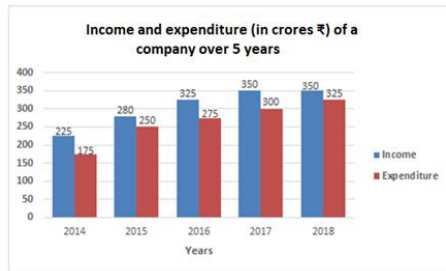
Question ID : 65497844341
Status : **Not Answered**
Chosen Option : --

Q.23 The area of similar triangles PQR and MNT are 196 cm^2 and 169 cm^2 respectively. If the longest side of the larger ΔPQR be 28 cm then what is the length (in cm) of the longest side of the smaller ΔMNT ?

- Ans**
- 1. 26
 - 2. 27
 - 3. 24
 - 4. 25

Question ID : 65497843742
Status : **Not Answered**
Chosen Option : --

Q.24 The given bar graph shows the income and expenditure (in crores ₹) of a company over 5 years, from 2014 to 2018. Study the bar graph and answer the question that follows.



Dots Academy

In which of the following years is the ratio of income to expenditure the minimum?

- Ans
- 1. 2017
 - 2. 2014
 - 3. 2016
 - 4. 2018

Question ID : 65497842737
Status : Not Answered
Chosen Option : --

Q.25 A sum of ₹17,200 is lent out at simple interest in two parts for 2 years at 8% p.a. and 10% p.a., respectively. If the total interest received after 2 years is ₹3,008, then the money lent (in ₹) at the rate of 8% p.a. is:

- Ans
- 1. 9,200
 - 2. 9,800
 - 3. 10,800
 - 4. 6,400

Question ID : 65497844239
Status : Not Answered
Chosen Option : --

Section : English Comprehension

Q.1 The following sentence has been divided into parts. One of them may contain an error. Select the part that contains the error from the given options. If you don't find any error, mark 'No error' as your answer.

The increase in irrigated areas / has resulted on achieving / record food grain production.

- Ans
- 1. record food grain production
 - 2. No error
 - 3. has resulted on achieving
 - 4. The increase in irrigated areas

Question ID : 65497844259
Status : Answered
Chosen Option : 4

Q.2 Select the most appropriate option to substitute the underlined segment in the given sentence. If there is no need to substitute it, select 'No substitution required'.

All the buses leaving between 10 p.m. and 5 a.m. has been cancelled.

- Ans
- 1. No substitution required
 - 2. being cancelled
 - 3. were cancelled
 - 4. were been cancelled

Question ID : 65497842350
Status : Answered
Chosen Option : 2

Q.3 Select the most appropriate option to fill in the blank.

People all over the world are concerned about the human right to live with _____.

- Ans
- 1. grandeur
 - 2. dignity
 - 3. poise
 - 4. delight

Question ID : 65497844382
Status : Answered
Chosen Option : 2

Q.4 Select the option that expresses the given sentence in indirect speech.

They cried, "Bravo! Well done."

- Ans
- 1. They cried in joy for doing well.
 - 2. They shouted in joy that they had done well.
 - 3. They exclaimed with wonder that they had done well.
 - 4. They cried loudly for doing well.

Dots Academy

Question ID : 65497844268
Status : Answered
Chosen Option : 3

Q.5 Select the option that expresses the given sentence in passive voice.

Most lizards rely on camouflage to hide from their enemies.

- Ans
- 1. Camouflage has been relied on by most lizards to hide from their enemies.
 - 2. Most lizards are being relied on by camouflage to hide from their enemies.
 - 3. Camouflage is relied on by most lizards to hide from their enemies.
 - 4. Camouflage was relied on by most lizards to hide from their enemies.

Question ID : 65497843756
Status : Answered
Chosen Option : 3

Q.6 Select the option that can be used as a one-word substitute for the given group of words.

A problem that is so difficult that it cannot be answered

- Ans
- 1. Solvable
 - 2. Terrible
 - 3. Impossible
 - 4. Insoluble

Question ID : 65497844380
Status : Answered
Chosen Option : 3

Q.7 Select the most appropriate option to fill in the blank.

The teacher kept stopping her online lesson _____ to check if her students were following it.

- Ans
- 1. occasionally
 - 2. impartially
 - 3. unresponsively
 - 4. indifferently

Question ID : 65497843775
Status : Answered
Chosen Option : 1

Q.8 The following sentence has been divided into parts. One of them may contain an error. Select the part that contains the error from the given options. If you don't find any error, mark 'No error' as your answer.

Aarav's mother / speaks four languages / fluently.

- Ans
- 1. fluently
 - 2. No error
 - 3. Aarav's mother
 - 4. speaks four languages

Dots Academy

Question ID : 65497844458
Status : Answered
Chosen Option : 2

Q.9 Select the most appropriate meaning of the given idiom.

Keep someone at arm's length

- Ans
- 1. Restrict someone to a small space to stand
 - 2. Make someone stay outside
 - 3. Avoid being friendly with someone
 - 4. Allow someone to talk only from a distance

Question ID : 65497842357
Status : Answered
Chosen Option : 1

Q.10 Select the most appropriate antonym of the given word.

sober

- Ans
- 1. straight
 - 2. calm
 - 3. unwell
 - 4. drunk

Question ID : 65497843768

Status : Answered

Chosen Option : 4

Q.11 Sentences of a paragraph are given below in jumbled order. Arrange the sentences in the correct order to form a meaningful and coherent paragraph.

A. It coincided with the 140th birth anniversary of Sardar Vallabhbhai Patel.

B. Through this innovative measure, the knowledge of the traditions and culture of different states is being shared.

C. The initiative 'Ek Bharat Shreshtha Bharat' was launched by the Honourable Prime Minister on 31st October 2015.

D. This will lead to an enhanced bonding and national integration.

- Ans
- 1. ABCD
 - 2. CBDA
 - 3. ADBC
 - 4. CABD

Dots Academy

Question ID : 65497843463

Status : Answered

Chosen Option : 4

Q.12 Select the option that expresses the given sentence in passive voice.

It is time to revise the syllabi.

- Ans
- 1. It is time for the syllabi to be revised.
 - 2. It is time for the syllabi to revise.
 - 3. It has been time for the syllabi to revise.
 - 4. It was time for the syllabi to be revised.

Question ID : 65497843452

Status : Answered

Chosen Option : 1

Q.13 Select the most appropriate ANTONYM of the given word.

Authentic

- Ans 1. Incredible
 2. Genuine
 3. Meagre
 4. Notorious

Dots Academy

Question ID : 65497844275
Status : Answered
Chosen Option : 1

Q.14 Select the option that can be used as a one-word substitute for the given group of words.

Unfairly take something belonging to another for one's use

- Ans 1. Misinterpret
 2. Misappropriate
 3. Misconstrue
 4. Misapprehend

Question ID : 65497843773
Status : Not Answered
Chosen Option : --

Q.15 The following sentence has been split into segments. One of them may contain an error. Identify the segment that contains a grammatical error. If you don't find any error, mark 'No error' as your answer.

I had all / the comforts to life / in my childhood.

- Ans 1. I had all
 2. the comforts to life
 3. in my childhood
 4. No error

Question ID : 65497842136
Status : Not Answered
Chosen Option : --

Q.16 Select the option that will improve the underlined part of the given sentence. In case no improvement is needed, select 'No improvement required'. They each listened carefully to what each other said.

- Ans 1. No improvement required
 2. one another
 3. each another
 4. the other

Question ID : 65497843462
Status : Answered
Chosen Option : 3

Q.17 Select the most appropriate meaning of the given idiom.

To fight shy of

- Ans
- 1. To attack without warning
 - 2. To try to avoid something
 - 3. To struggle hard
 - 4. To overcome one's weakness

Question ID : 65497844277
Status : Not Answered
Chosen Option : --

Q.18 Select the most appropriate synonym of the given word.

Amass

- Ans
- 1. Spread
 - 2. Divide
 - 3. Scatter
 - 4. Gather

Question ID : 65497843464
Status : Not Answered
Chosen Option : --

Q.19 The following sentence has been split into four segments. Identify the segment that contains a grammatical error.

What would / happen if / human beings were / govern by robots?

- Ans
- 1. human beings were
 - 2. govern by robots
 - 3. happen if
 - 4. What would

Question ID : 65497843753
Status : Not Answered
Chosen Option : --

Q.20 Select the most appropriate ANTONYM of the given word.

Relay

- Ans
- 1. Hold
 - 2. Pass
 - 3. Send
 - 4. Spread

Dots Academy

Question ID : 65497842355
Status : Answered
Chosen Option : 1

Comprehension:

In the following passage some words have been deleted. Fill in the blanks with the help of alternatives given. Select the most appropriate option for each blank.

Listening plays (1) _____ role in the interactive process of business transactions. It enables a person to gather proper and (2) _____ information so that he can understand the matter with clarity. For this, he should have a positive attitude towards the speaker and the (3) _____. He should also (4) _____ on what is being spoken and then evaluate it with reference to the (5) _____.

SubQuestion No : 21

Q.21 Select the most appropriate option to fill in blank number 1.

Ans ✓ 1. a significant

✗ 2. a paltry

✗ 3. an abundant

✗ 4. a trivial

Question ID : 65497844364

Status : Answered

Chosen Option : 1

Comprehension:

In the following passage some words have been deleted. Fill in the blanks with the help of alternatives given. Select the most appropriate option for each blank.

Listening plays (1) _____ role in the interactive process of business transactions. It enables a person to gather proper and (2) _____ information so that he can understand the matter with clarity. For this, he should have a positive attitude towards the speaker and the (3) _____. He should also (4) _____ on what is being spoken and then evaluate it with reference to the (5) _____.

SubQuestion No : 22

Q.22 Select the most appropriate option to fill in blank number 2.

Ans ✗ 1. superficial

✗ 2. vague

✓ 3. accurate

✗ 4. approximate

Question ID : 65497844365

Status : Answered

Chosen Option : 3

Comprehension:

In the following passage some words have been deleted. Fill in the blanks with the help of alternatives given. Select the most appropriate option for each blank.

Listening plays (1) _____ role in the interactive process of business transactions. It enables a person to gather proper and (2) _____ information so that he can understand the matter with clarity. For this, he should have a positive attitude towards the speaker and the (3) _____. He should also (4) _____ on what is being spoken and then evaluate it with reference to the (5) _____.

SubQuestion No : 23

Q.23 Select the most appropriate option to fill in blank number 3.

- Ans 1. words
 2. writer
 3. orator
 4. topic

Question ID : 65497844366

Status : **Marked For Review**

Chosen Option : 2

Comprehension:

In the following passage some words have been deleted. Fill in the blanks with the help of alternatives given. Select the most appropriate option for each blank.

Listening plays (1) _____ role in the interactive process of business transactions. It enables a person to gather proper and (2) _____ information so that he can understand the matter with clarity. For this, he should have a positive attitude towards the speaker and the (3) _____. He should also (4) _____ on what is being spoken and then evaluate it with reference to the (5) _____.

SubQuestion No : 24

Q.24 Select the most appropriate option to fill in blank number 4.

- Ans 1. neglect
 2. concentrate
 3. disperse
 4. distract

Question ID : 65497844367

Status : **Answered**

Chosen Option : 2

Comprehension:

In the following passage some words have been deleted. Fill in the blanks with the help of alternatives given. Select the most appropriate option for each blank.

Listening plays (1) _____ role in the interactive process of business transactions. It enables a person to gather proper and (2) _____ information so that he can understand the matter with clarity. For this, he should have a positive attitude towards the speaker and the (3) _____. He should also (4) _____ on what is being spoken and then evaluate it with reference to the (5) _____.

SubQuestion No : 25

Dots Academy

Q.25 Select the most appropriate option to fill in blank number 5.

- Ans
- 1. paragraph
 - 2. selection
 - 3. excerpt
 - 4. context

Question ID : **65497844368**

Status : **Answered**

Chosen Option : **4**