

## Combined Graduate Level Examination 2021 Tier - I

Roll Number	
Candidate Name	
Venue Name	Dots Academy
Exam Date	19/04/2022
Exam Time	12:30 PM - 1:30 PM
Subject	CGLE 2021 Tier I

### Section : General Intelligence and Reasoning

**Q.1** Study the given pattern carefully and select the number from among the given options that can replace the question mark (?) in it.

8 55 56  
91 28 2 68 20 11 27 ? 7  
13 17 9

- Ans
- 1. 18
  - 2. 20
  - 3. 24
  - 4. 30

Question ID : 65497842479  
Status : Not Answered  
Chosen Option : --

**Q.2** Four letter-clusters have been given, out of which three are alike in some manner and one is different. Select the one that is different.

- Ans
- 1. FKP
  - 2. HLP
  - 3. LQJ
  - 4. SXC

Question ID : 65497842466  
Status : Answered  
Chosen Option : 3

**Q.3** Select the option that represents the correct order of the given words as they would appear in an English dictionary.

1. Speaking
2. Standardize
3. Southern
4. Stampede
5. Spacious
6. Sovereignty

- Ans
- 1. 3, 4, 6, 5, 1, 2
  - 2. 3, 2, 6, 1, 4, 5
  - 3. 3, 6, 5, 1, 4, 2
  - 4. 3, 6, 2, 4, 1, 5

Question ID : 65497844182  
Status : Answered  
Chosen Option : 3

Q.4 If '@' means 'addition', '%' means 'multiplication', '\$' means 'division' and '#' means 'subtraction', then find the value of the following expression.

126 \$ 7 % 3 @ 19 # 21

Ans  1. 52

2. 18

3. 4

4. 23

Question ID : 65497842582

Status : Answered

Chosen Option : 1

Q.5 Select the letter-cluster from among the given options that can replace the question mark (?) in the following series.

PGF, QJK, RMP, SPU, ?

Ans  1. STY

2. RTZ

3. USX

4. TSZ

Question ID : 65497842565

Status : Answered

Chosen Option : 4

Q.6 If the father of Swati is the maternal grandfather of Divya, who is the daughter of Manya, then how is Manya's husband's father related to Divya?

Ans  1. Paternal uncle

2. Father

3. Maternal uncle

4. Paternal grandfather

Question ID : 65497844088

Status : Answered

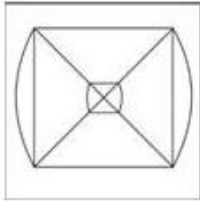
Chosen Option : 4

Q.7 Select the option in which the given figure is embedded (rotation is NOT allowed).

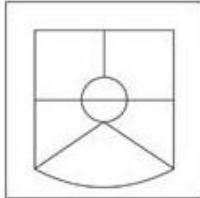


Ans

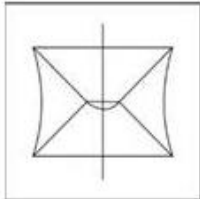
✗ 1.



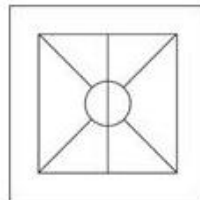
✗ 2.



✗ 3.



✓ 4.



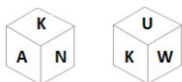
Dots Academy

Question ID : 65497842485

Status : Answered

Chosen Option : 4

Q.8 Six letters, A, P, K, U, W and N, are written on different faces of a dice. Two positions of this dice are shown. Select the letter that will be on the face opposite to the one having N.



Ans

✓ 1. U

✗ 2. P

✗ 3. W

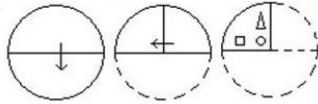
✗ 4. A

Question ID : 65497842585

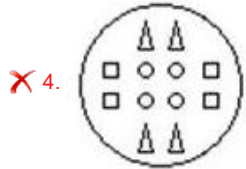
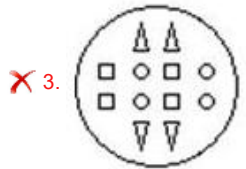
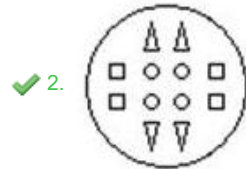
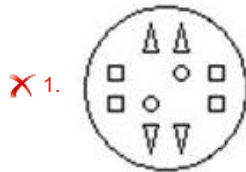
Status : Answered

Chosen Option : 1

**Q.9** The sequence of folding a piece of paper and the manner in which the folded paper has been cut is shown in the following figures. How would this paper look when unfolded?



**Ans**



Dots Academy

Question ID : 65497843194

Status : Answered

Chosen Option : 4

**Q.10** Read the given statements and conclusions carefully. Assuming that the information given in the statements is true, even if it appears to be at variance with commonly known facts, decide which of the given conclusions logically follow(s) from the statements.

**Statements:**

Some schools are colleges.

All colleges are universities.

**Conclusions:**

I. All universities are schools.

II. Some universities are colleges.

**Ans** ✗ 1. Both the conclusions follow.

✗ 2. Either conclusion I or II follows.

✗ 3. Only conclusion I follows.

✓ 4. Only conclusion II follows.

Question ID : 65497842575

Status : Answered

Chosen Option : 4

Q.11 Select the option in which the two numbers are related in the same way as are the two numbers of the following number-pair.

25 : 343

- Ans  1. 34 : 510  
 2. 24 : 216  
 3. 30 : 729  
 4. 29 : 121

Question ID : 65497843184  
Status : Answered  
Chosen Option : 2

Q.12 Raghav, Manpreet, Sunaina, Prakrit, Vedika and Arwa are sitting around a circular table facing the centre. Raghav is second to the left of Prakrit. Manpreet is to the immediate left of Sunaina. Arwa is second to the right of Vedika. There are an equal number of persons between Raghav and Manpreet from both the ends. Who is sitting third to the left of Sunaina?

- Ans  1. Prakrit  
 2. Vedika  
 3. Arwa  
 4. Raghav

Question ID : 65497844089  
Status : Not Attempted and Marked For Review  
Chosen Option : --

Q.13 Select the number from among the given options that can replace the question mark (?) in the following series.

361, 323, 285, 247, ?

- Ans  1. 209  
 2. 227  
 3. 215  
 4. 232

Dots Academy

Question ID : 65497842475  
Status : Not Attempted and Marked For Review  
Chosen Option : --

Q.14 A total amount of ₹2,95,000 is to be distributed between Vineet, Prateek and Mayank in such a way that Vineet gets half of the amount that Mayank gets and Prateek gets ₹25,000 less than Vineet. How much amount will Vineet get?

- Ans  1. ₹85,000  
 2. ₹70,000  
 3. ₹55,000  
 4. ₹80,000

Question ID : 65497842983  
Status : Not Answered  
Chosen Option : --

Q.15 In a certain code, 'jig fig vic' means 'I love India' and 're dig fig lic vic' means 'I like culture of India'. Which of the following is the code for 'love'?

- Ans  1. lic  
 2. fig  
 3. vic  
 4. jig

Question ID : 65497842470  
 Status : Answered  
 Chosen Option : 4

Q.16 Select the correct mirror image of the given combination when the mirror is placed at 'PQ' as shown.



- Ans  1. ↕ E w b a z 4  
 2. ↕ 4 z a p w E  
 3. ↕ 4 z a p w E  
 4. ↕ E w b a z 4

Dots Academy

Question ID : 65497844102  
 Status : Answered  
 Chosen Option : 3

Q.17 Shweta starts walking from her office and walks 150 m towards the south, then she turns right and walks 80 m, and then she turns left and walks 60 m. She finally turns left and walks 280 m to reach a bank. What is the shortest distance between her office and the bank?

- Ans  1. 410 m  
 2. 370 m  
 3. 290 m  
 4. 280 m

Question ID : 65497843189  
 Status : Not Answered  
 Chosen Option : --

Q.18 In the following Venn diagram, the pentagon stands for 'clerks', the triangle stands for 'coffee-lovers', the square stands for 'car-owners' and the circle stands for 'social workers'. The given letters represent the persons in that particular category.



Which of the following categories of persons is represented by the letter 'D'?

- Ans  1. Car-owners who are coffee-lovers but not social workers  
 2. Coffee-lovers who are car-owners, social workers and clerks also  
 3. Coffee-lovers who are either car-owners or social workers  
 4. Coffee-lovers who are car-owners and social workers also

Question ID : 65497842993  
 Status : Answered  
 Chosen Option : 4

Q.19 Select the correct combination of mathematical signs that can sequentially replace the \* signs to balance the following equation.

$$22 * 66 * 33 * 11 * 44 * 0$$

Ans  1. +, ÷, ×, -, =

2. +, ÷, -, ×, =

3. ×, +, +, -, =

4. ÷, +, ×, -, =

Question ID : 65497844096

Status : Not Answered

Chosen Option : --

Q.20 In a certain code language, 'FIXED' is written as 'XIFED', and 'MOUSE' is written as 'USOME'. How will 'GAMBIT' be written in that language?

Ans  1. TGMIBA

2. TMIGBA

3. TIMGAB

4. TMGIBA

Question ID : 65497843983

Status : Not Answered

Chosen Option : --

Q.21 Select the option that is related to the third term in the same way as the second term is related to the first term.

QUICKER : TGMEKWS :: REPORTS : ?

Ans  1. UVTRRHT

2. USVQRGT

3. VUTQRGS

4. UVTQRGT

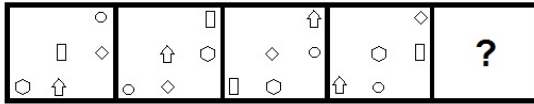
Dots Academy

Question ID : 65497842972

Status : Answered

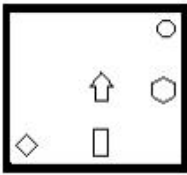
Chosen Option : 4

**Q.22** Select the figure from among the given options that can replace the question mark (?) in the following series.

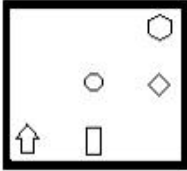


Ans

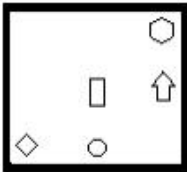
1.



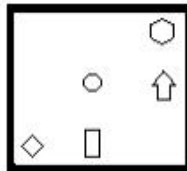
2.



3.



4.



Dots Academy

Question ID : 65497844099

Status : Not Answered

Chosen Option : --

**Q.23** Select the combination of letters that when sequentially placed in the blanks of the given series will complete the series.

P Q \_ Q P P Q R \_ P P Q R Q \_ P Q R Q \_

Ans  1. R Q P P

2. Q R P P

3. P P R Q

4. P Q R P

Question ID : 65497843986

Status : Answered

Chosen Option : 1

**Q.24** Select the number from among the given options that can replace the question mark (?) in the following series.

12, 38, 116, 350, ?

Ans  1. 916

2. 1052

3. 1012

4. 986

Question ID : 65497842577

Status : Not Answered

Chosen Option : --



Q.25 In a certain code language, 'GALLERY' is written as '1422424103650'. How will 'NOSTALGIA' be written in that language?

- Ans
- 1. 2832384222416182
  - 2. 2830384022414182
  - 3. 2830384022614362
  - 4. 2830204222414184

Question ID : 65497843176  
Status : Answered  
Chosen Option : 2

Section : General Awareness

Q.1 Which of the following is a characteristic of amorphous solids?

- Ans
- 1. A definite and characteristic enthalpy of fusion
  - 2. A definite characteristic geometrical shape
  - 3. Gradual softening over a range of temperatures
  - 4. Melting at a sharp and characteristic temperature

Question ID : 65497842495  
Status : Not Answered  
Chosen Option : --

Q.2 Who among the following created a national record in the javelin throw event at the third Indian Grand Prix meet in March 2021?

- Ans
- 1. Shivpal Singh
  - 2. Vipin Kasana
  - 3. Devendra Jhajharia
  - 4. Neeraj Chopra

Dots Academy

Question ID : 65497842613  
Status : Answered  
Chosen Option : 4

Q.3 Which of the following is a mountain between India and Nepal?

- Ans
- 1. Manaslu
  - 2. Dhaulagiri
  - 3. Kanchenjunga
  - 4. Makalu

Question ID : 65497842602  
Status : Answered  
Chosen Option : 3

Q.4 Capsaicinoids, carotenoids, phenolics, and vitamins are dominant chemicals in which of the following foods?

- Ans
- 1. Chilli
  - 2. Radish
  - 3. Garlic
  - 4. Carrot

Question ID : 65497843004  
Status : Answered  
Chosen Option : 4

Q.5 Who among the following won the All England Open Badminton Championship 2020 in the Men's Singles category?

- Ans  1. Anders Antonsen  
 2. Viktor Axelsen  
 3. Chou Tien-chen  
 4. Kento Momota

Question ID : 65497843018  
Status : Not Answered  
Chosen Option : --

Q.6 Which day has been declared by the World Health Organization as Hand Hygiene Day?

- Ans  1. 18th August  
 2. 21st July  
 3. 14th June  
 4. 5th May

Question ID : 65497842595  
Status : Not Answered  
Chosen Option : --

Q.7 Who among the following Indian musicians was a part of a band named 'Planet Drum' along with Mickey Hart, Sikiru Adepaju, and Giovanni Hidalgo, whose first album received the 1992 Grammy Award for Best World Music Album, which was the first Grammy in this category?

- Ans  1. Bhimsen Joshi  
 2. Hariprasad Chaurasia  
 3. Zakir Hussain  
 4. Ravi Shankar

Dots Academy

Question ID : 65497843214  
Status : Not Answered  
Chosen Option : --

Q.8 In which Indian state is the 'Fatorpa Zatra' celebrated?

- Ans  1. Goa  
 2. Himachal Pradesh  
 3. Madhya Pradesh  
 4. Kerala

Question ID : 65497842591  
Status : Not Answered  
Chosen Option : --

Q.9 The Constituent Assembly was recognised by Section \_\_\_\_\_ of the Indian Independence Act, 1947.

- Ans  1. 6(2)  
 2. 12(2)  
 3. 8(1)  
 4. 10(1)

Question ID : 65497842511  
Status : Not Answered  
Chosen Option : --

Q.10 After the death of Shri Guru Gobind Singh, the Sikhs revolted against the \_\_\_\_\_ under the leadership of Banda Bahadur.

- Ans
- 1. British
  - 2. Marathas
  - 3. Gurkhas
  - 4. Mughals

Dots Academy

Question ID : 65497842503  
Status : Answered  
Chosen Option : 4

Q.11 In India, the Protection of Children from Sexual Offences (POCSO) Act, \_\_\_\_\_ is a comprehensive law to provide for the protection of children from the offences of sexual assault, sexual harassment and pornography, while safeguarding the interests of the child.

- Ans
- 1. 2008
  - 2. 2012
  - 3. 2006
  - 4. 2010

Question ID : 65497843216  
Status : Not Answered  
Chosen Option : --

Q.12 In which of the following years was the Mont-Ford Reforms report presented by the British colonial government in India?

- Ans
- 1. 1942
  - 2. 1907
  - 3. 1934
  - 4. 1918

Question ID : 65497843212  
Status : Answered  
Chosen Option : 4

Q.13 The Hundru Fall lies along the course of which of the following rivers?

- Ans
- 1. Damodar
  - 2. Mahanadi
  - 3. Sone
  - 4. Subarnarekha

Question ID : 65497844116  
Status : Not Answered  
Chosen Option : --

Q.14 Which of the following is a disease caused by drinking contaminated water?

- Ans
- 1. Rickets
  - 2. Anaemia
  - 3. Cholera
  - 4. Scurvy

Question ID : 65497843002  
Status : Answered  
Chosen Option : 3

Q.15 Who among the following is the author of the book 'The Coalition Years'?

- Ans  1. Giani Zail Singh  
 2. Pranab Mukherjee  
 3. APJ Abdul Kalam  
 4. KR Narayanan

Question ID : 65497844122  
Status : Answered  
Chosen Option : 2

Q.16 Which of the following is a foreign bank operating in India as of 31st May 2021?

- Ans  1. HDFC Bank Ltd  
 2. Axis Bank Ltd  
 3. ICICI Bank Ltd  
 4. BNP Paribas

Question ID : 65497843198  
Status : Answered  
Chosen Option : 4

Q.17 According to the Union Budget 2020-2021, the bank credit growth as of January 1, 2021, stood at \_\_\_\_\_%

- Ans  1. 5.2  
 2. 7.1  
 3. 6.7  
 4. 5.9

Question ID : 65497844109  
Status : Not Answered  
Chosen Option : --

Q.18 Lalita is a form of folk music from \_\_\_\_\_.

- Ans  1. Gujarat  
 2. Rajasthan  
 3. Maharashtra  
 4. Madhya Pradesh

Dots Academy

Question ID : 65497842489  
Status : Not Answered  
Chosen Option : --

Q.19 The 74th Amendment Act of 1992 added a new Part \_\_\_\_\_ to the Constitution of India.

- Ans  1. X  
 2. IX  
 3. VIII  
 4. IX-A

Question ID : 65497844126  
Status : Answered  
Chosen Option : 4

Q.20 Which of the following techniques can be used for reducing the total dissolved solids (TDS) in water?

- (1) Ion Exchange
- (2) Distillation
- (3) Carding

Ans  1. Only 3

2. Both 1 and 2

3. Only 1

4. Both 2 and 3

Dots Academy

Question ID : 65497843203

Status : Not Answered

Chosen Option : --

Q.21 With which of the following organisations was Lala Har Dayal associated?

Ans  1. Indian Independence League

2. Indian Home Rule Society

3. Ghadar Party

4. Swaraj Party

Question ID : 65497842605

Status : Answered

Chosen Option : 3

Q.22 As per the Economic Survey 2021, in which of the following states did the proportion of households that had health insurance decrease by 12% from 2015-16 to 2019-20?

Ans  1. Sikkim

2. Assam

3. West Bengal

4. Bihar

Question ID : 65497842997

Status : Not Answered

Chosen Option : --

Q.23 What is the atomic number of nitrogen?

Ans  1. 5

2. 8

3. 6

4. 7

Question ID : 65497844114

Status : Marked For Review

Chosen Option : 1

Q.24 Who among the following was nominated for the Saraswati Samman, 2020?

Ans  1. Pratibha Ray

2. Manishankar Mukherjee

3. Manoj Das

4. Sharankumar Limbale

Question ID : 65497843013

Status : Not Answered

Chosen Option : --

**Q.25** Which of the following is the shallowest part of the ocean showing an average gradient of  $1^\circ$  or even less?

- Ans
- 1. Oceanic deeps
  - 2. ontinental slope
  - 3. Continental shelf
  - 4. Deep sea plain

Question ID : 65497842502  
Status : Not Answered  
Chosen Option : --

Section : Quantitative Aptitude

**Q.1** If  $8A5146B$  is divisible by 88, then what is the value of  $A^B$  ?

- Ans
- 1. 64
  - 2. 27
  - 3. 81
  - 4. 12

Question ID : 65497842615  
Status : Answered  
Chosen Option : 3

**Q.2** A 20 m long ladder rests against a wall so that the angle between the ladder and the wall is  $30^\circ$ . How far (in m) is the base of the ladder from the wall?

- Ans
- 1.  $10\sqrt{3}$
  - 2.  $20\sqrt{3}$
  - 3. 10
  - 4. 20

Question ID : 65497843039  
Status : Answered  
Chosen Option : 1

**Q.3** Two similar jugs have their heights of 8 cm and 12 cm, respectively. If the capacity of the smaller jug is  $80 \text{ cm}^3$ , what is the capacity of the bigger jug (in  $\text{cm}^3$ )?

- Ans
- 1. 192
  - 2. 270
  - 3. 216
  - 4. 120

Dots Academy

Question ID : 65497843333  
Status : Answered  
Chosen Option : 4

**Q.4** A and B had a joint business in which A invested ₹60,000 in the business for one year. After 3 months B invested ₹80,000. At the beginning of the second year, A invested ₹30,000 more and B withdrew ₹5,000. At the end of two years, profit earned by A is ₹35,880. What is the profit (in ₹) earned by B, if they distributed half of the total profit equally and rest in the capital ratio?

- Ans**
- ✓ 1. 34,040
  - ✗ 2. 69,920
  - ✗ 3. 38,060
  - ✗ 4. 58,940

Question ID : 65497843228  
 Status : Not Answered  
 Chosen Option : --

**Q.5** If  $x^2 - 5x - 1 = 0$ , what is the value of

$$\frac{x^6 - x^4 + x^2 - 1}{x^2} ?$$

- Ans**
- ✗ 1. 145
  - ✗ 2. 130
  - ✗ 3. 140
  - ✓ 4. 135

Question ID : 65497843234  
 Status : Not Answered  
 Chosen Option : --

**Q.6** Chords AB and CD of a circle intersect externally at P. If AB = 7 cm, CD = 1 cm and PD = 5 cm, then 50% of the length of PA (in cm) is:

- Ans**
- ✓ 1. 5
  - ✗ 2. 3
  - ✗ 3. 10
  - ✗ 4. 8

Question ID : 65497842630  
 Status : Not Answered  
 Chosen Option : --

**Q.7** If  $\cos 53^\circ = \frac{x}{y}$ , then  $\sec 53^\circ + \cot 37^\circ$  is equal to:

- Ans**
- ✗ 1.  $\frac{x + \sqrt{y^2 - x^2}}{y}$
  - ✓ 2.  $\frac{y + \sqrt{y^2 - x^2}}{x}$
  - ✗ 3.  $\frac{y + \sqrt{y^2 - x^2}}{y}$
  - ✗ 4.  $\frac{x + \sqrt{y^2 - x^2}}{x}$

Dots Academy

Question ID : 65497843239  
 Status : Answered  
 Chosen Option : 2

**Q.8** The compound interest on a certain sum of money at 21% p.a. for 2 years is ₹11,138.40 (interest compounded yearly).  
The total amount received (in ₹) after 2 years is:

- Ans**
- 1. 31,538.40
  - 2. 35,138.40
  - 3. 24,000.50
  - 4. 28,315.40

Question ID : **65497842522**  
Status : **Not Answered**  
Chosen Option : --

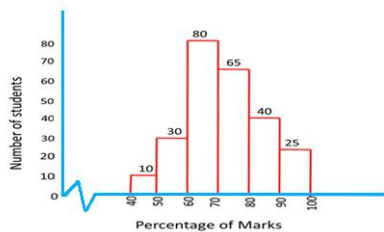
**Q.9** A car covers a distance of 90 km in 50 min. What is its speed (in m/s)?

- Ans**
- 1. 108
  - 2. 60
  - 3. 30
  - 4. 90

Question ID : **65497843231**  
Status : **Answered**  
Chosen Option : **3**

**Q.10** Study the given histogram and answer the question that follows.

The histogram represents the percentage of marks obtained by a number of students of a school in the class X Board Examination in 2018. The total number of students = 250.



Dots Academy

The number of students who have obtained less than 50% marks is approximately what percentage less than the number of students who have obtained 90% marks and above?

- Ans**
- 1. 40%
  - 2. 60%
  - 3. 80%
  - 4. 75%

Question ID : **65497842538**  
Status : **Answered**  
Chosen Option : **2**



**Q.11** A circle is inscribed in  $\triangle ABC$ , touching AB, BC and AC at the points P, Q and R, respectively. If  $AB - BC = 4$  cm,  $AB - AC = 2$  cm and the perimeter of  $\triangle ABC = 32$  cm, then  $\frac{BC}{2}$  (in cm) = ?

- Ans**
- 1.  $\frac{10}{3}$
  - 2.  $\frac{20}{3}$
  - 3.  $\frac{11}{3}$
  - 4.  $\frac{13}{3}$

Question ID : 65497842528

Status : Not Answered

Chosen Option : --

**Q.12** The circumcentre of an equilateral triangle is at a distance of 3.2 cm from the base of the triangle. What is the length (in cm) of each of its altitudes?

- Ans**
- 1. 12.8
  - 2. 7.2
  - 3. 6.4
  - 4. 9.6

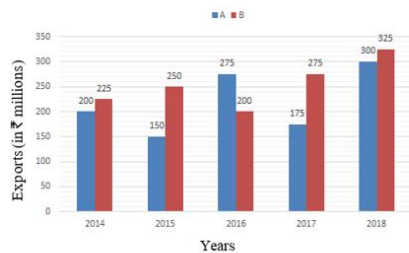
Question ID : 65497843237

Status : Answered

Chosen Option : 3

**Q.13** Study the given bar graph and answer the question that follows.

The bar graph shows the exports of cars of type A and B (in ₹ millions) from 2014 to 2018.



Dots Academy

The total exports of cars of type B from 2015 to 2018 is what percentage more than the total exports of cars of type A from 2015 to 2018 (correct to one decimal place)?

- Ans**
- 1. 17.2%
  - 2. 14.9%
  - 3. 16.7%
  - 4. 15.5%

Question ID : 65497842535

Status : Not Attempted and Marked For Review

Chosen Option : --

Q.14 If  $a^2 + b^2 + 49c^2 + 18 = 2(b + 28c - a)$ , then the value of  $(2a - b + 7c)$  is:

- Ans  1. 1  
 2. -4  
 3. 5  
 4. -3

Question ID : 65497844142  
Status : Not Answered  
Chosen Option : --

Q.15 Find a single discount percentage equivalent to successive discounts of 10%, 20% and 25%.

- Ans  1. 20%  
 2. 46%  
 3. 18.3%  
 4. 55%

Question ID : 65497843427  
Status : Answered  
Chosen Option : 4

Q.16 In  $\triangle ABC$ ,  $\angle A = 66^\circ$ ,  $BD \perp AC$  and  $CE \perp AB$ .  $BD$  and  $EC$  intersect at  $P$ . The bisectors  $\angle PBC$  and  $\angle PCB$  meet at  $Q$ .  
What is the measure of  $\angle BQC$ ?

- Ans  1.  $143^\circ$   
 2.  $132^\circ$   
 3.  $147^\circ$   
 4.  $127^\circ$

Dots Academy

Question ID : 65497844147  
Status : Not Answered  
Chosen Option : --

Q.17 An article is sold at a profit of  $13\frac{1}{4}\%$ . Had it been sold for ₹76.70 more, the profit would have been  $16\frac{1}{5}\%$ . 50% of the cost price of the article (in ₹) is:

- Ans  1. 1,500  
 2. 1,300  
 3. 2,500  
 4. 1,250

Question ID : 65497844136  
Status : Not Answered  
Chosen Option : --

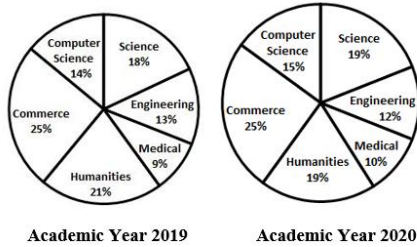
Q.18 The average of three numbers is 15. The average of the second and the third number is 12.5. What is the first number?

- Ans  1. 20  
 2. 24  
 3. 21  
 4. 18

Question ID : 65497843325  
Status : Answered  
Chosen Option : 1

**Q.19** The following pie-charts show the number of students studying in different departments of an institute during the academic years 2019 and 2020. The total number of students was 2000 and 2400, respectively, in academic years 2019 and 2020.

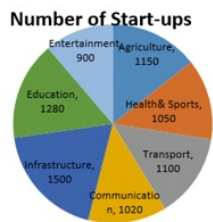
What is the ratio of the number of students studying science in the year 2019 to that in the year 2020?



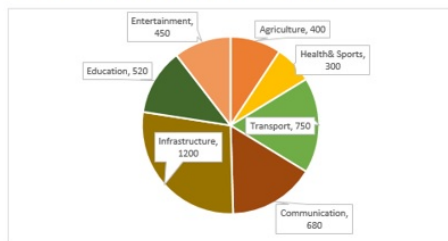
- Ans**
- 1. 18 : 19
  - 2. 20 : 21
  - 3. 14 : 15
  - 4. 15 : 19

Question ID : **65497843446**  
 Status : **Answered**  
 Chosen Option : **4**

**Q.20** The given pie charts show the number of start-ups in various industries since 2010 and the number of successful start-ups in those industries. Study the charts and answer the question that follows. Start-ups in various industries started since 2010



Successful start-ups in various industries



What should be the increase in the number (to the nearest integer) of successful start-ups in the industry of Health & Sports, so that its success percentage is the same as that of Education?

- Ans**
- 1. 127
  - 2. 155
  - 3. 220
  - 4. 187

Question ID : **65497843041**  
 Status : **Not Answered**  
 Chosen Option : **--**

Dots Academy

Q.21 What is the LCM of 3.6, 1.8 and 0.144?

- Ans
- ✓ 1. 3.6
  - ✗ 2. 360
  - ✗ 3. 36
  - ✗ 4. 3600

Question ID : 65497843020  
Status : Answered  
Chosen Option : 3

Q.22 If  $\cos B = \frac{5}{7}$ , what is the value of  $\operatorname{cosec} B + \cot B$ ? Given that  $0 < B < \frac{\pi}{2}$

- Ans
- ✗ 1.  $\frac{5}{\sqrt{6}}$
  - ✗ 2.  $\frac{\sqrt{6}}{12}$
  - ✗ 3.  $\frac{7}{\sqrt{6}}$
  - ✓ 4.  $\sqrt{6}$

Question ID : 65497844149  
Status : Answered  
Chosen Option : 4

Q.23 What is the simplified value of the following?

$$\frac{9 \div \frac{3}{7} \text{ of } (9 + 6 \times \overline{4 - 2}) + \left[ \frac{1}{5} \div \frac{7}{25} - \left\{ \frac{5}{8} + \frac{6}{16} \right\} \right]}{24 \div \overline{16 - 10} + 36 \div (5 + 20 \div 4 - 1)}$$

- Ans
- ✗ 1.  $\frac{51}{56}$
  - ✗ 2.  $\frac{40}{7}$
  - ✓ 3.  $\frac{5}{56}$
  - ✗ 4.  $\frac{7}{40}$

Dots Academy

Question ID : 65497843021  
Status : Not Answered  
Chosen Option : --

**Q.24** X, Y and Z can complete a piece of work in 46 days, 92 days and 23 days, respectively. X started the work. Y joined him after 7 days. If Z joined them after 8 days from the beginning, then for how many days did Y work?

- Ans
- 1.  $9\frac{5}{7}$
  - 2.  $10\frac{5}{7}$
  - 3.  $12\frac{5}{7}$
  - 4.  $11\frac{5}{7}$

Dots Academy

Question ID : 65497844139  
Status : Not Answered  
Chosen Option : --

**Q.25** A is 120% of B and B is 65% of C. If the sum of A, B and C is 121.5, then the value of  $C - 2B + A$  is:

- Ans
- 1. 35
  - 2. 24
  - 3. 39
  - 4. 14

Question ID : 65497842620  
Status : Not Answered  
Chosen Option : --

Section : English Comprehension

**Q.1** The following sentence has been split into four segments. Identify the segment that contains a grammatical error.

I was angry / on myself / for making / such a silly mistake.

- Ans
- 1. on myself
  - 2. for making
  - 3. such a silly mistake
  - 4. I was angry

Question ID : 65497843248  
Status : Marked For Review  
Chosen Option : 2

**Q.2** The following sentence has been split into four segments. Identify the segment that contains a grammatical error.

I asked my friend / where had he / learnt to dance / so well.

- Ans
- 1. where had he
  - 2. I asked my friend
  - 3. so well
  - 4. learnt to dance

Question ID : 65497842542  
Status : Answered  
Chosen Option : 1

**Q.3** Given below are four jumbled sentences. Select the option that gives their correct order.

- A. For example, the sound of footsteps followed by the slam of a door are like phrases which convey some information.
- B. In films, sound effects play the part of words.
- C. We then know who is performing an action and why, and a clear picture is formed in our mind's eye.
- D. Once the sounds are prefaced or followed by a dialogue, the sentence is complete.

- Ans  1. BADC  
 2. CBDA  
 3. DCBA  
 4. BCDA

Question ID : 65497843059  
Status : Answered  
Chosen Option : 1

**Q.4** The following sentence has been divided into parts. One of them may contain a grammatical error. Select the part that contains the error from the given options. If you don't find any error, mark 'No error' as your answer.

This park is / the largest bird sanctuary / in the State.

- Ans  1. the largest bird sanctuary  
 2. No error  
 3. in the State  
 4. This park is

Dots Academy

Question ID : 65497842337  
Status : Answered  
Chosen Option : 2

**Q.5** Select the option that can be used as a one-word substitute for the given group of words.

Unable to express feelings clearly

- Ans  1. Inarticulate  
 2. Eloquent  
 3. Affluent  
 4. Verbose

Question ID : 65497844178  
Status : Answered  
Chosen Option : 1

**Q.6** Select the INCORRECTLY spelt word.

- Ans  1. Disturbence  
 2. Opportunity  
 3. Conscious  
 4. Genius

Question ID : 65497843270  
Status : Answered  
Chosen Option : 1

Q.7 Select the most appropriate synonym of the given word.

Monotonous

- Ans
- 1. Momentous
  - 2. Compulsory
  - 3. Eventful
  - 4. Boring

Dots Academy

Question ID : 65497843263  
Status : Answered  
Chosen Option : 4

Q.8 Select the most appropriate meaning of the given idiom.

To hold water

- Ans
- 1. To be large and deep
  - 2. To be valid and reasonable
  - 3. To be unsteady and unsure
  - 4. To be sad and depressed

Question ID : 65497842560  
Status : Answered  
Chosen Option : 2

Q.9 Select the option that expresses the given sentence in passive voice.

Can you carry my bag upstairs?

- Ans
- 1. Can my bag be carried upstairs by you?
  - 2. Was my bag carried upstairs by you?
  - 3. Could your bag be carried upstairs by me?
  - 4. Can your bag be carried upstairs by me?

Question ID : 65497843048  
Status : Answered  
Chosen Option : 1

Q.10 Select the option that can be used as a one-word substitute for the given group of words.

A style of cooking food, characteristic of a particular country or region

- Ans
- 1. Cuisine
  - 2. Menu
  - 3. Antique
  - 4. Creche

Question ID : 65497843268  
Status : Answered  
Chosen Option : 1

Q.11 Select the most appropriate meaning of the given idiom.

Play with fire

- Ans
- 1. To fight an opponent
  - 2. To be courageous
  - 3. To spread knowledge
  - 4. To do something dangerous

Question ID : 65497842660

Status : Answered

Chosen Option : 4

Q.12 The following sentence has been divided into parts. One of them may contain an error. Select the part that contains the error from the given options. If you don't find any error, mark 'No error' as your answer.

Shamim have not / attended school / for four days now.

- Ans
- 1. for four days now
  - 2. Shamim have not
  - 3. attended school
  - 4. No error

Dots Academy

Question ID : 65497844357

Status : Answered

Chosen Option : 2

Q.13 Select the most appropriate synonym of the given word.

Abandon

- Ans
- 1. Rescue
  - 2. Possess
  - 3. Quit
  - 4. Retain

Question ID : 65497843060

Status : Answered

Chosen Option : 3

Q.14 Select the option that will improve the underlined part of the given sentence. In case no improvement is needed, select 'No improvement required'.

Since setting up, the charity has raised a million dollars.

- Ans
- 1. From setting up
  - 2. Since setting
  - 3. Since being set up
  - 4. No improvement required

Question ID : 65497842653

Status : Not Answered

Chosen Option : --



Q.15 Select the correct passive voice form of the given sentence.

The Chief Minister inaugurated the new hospital.

- Ans
- 1. I am being assigned a new project by my manager.
  - 2. I will be assigning a new project to my manager.
  - 3. My manager is assigning me a new project.
  - 4. My manager has assigned me a new project.

Dots Academy

Question ID : 65497843251  
Status : Not Answered  
Chosen Option : --

Q.16 Select the most appropriate ANTONYM of the given word.

Taut

- Ans
- 1. Slack
  - 2. Solid
  - 3. Tight
  - 4. Strong

Question ID : 65497842558  
Status : Answered  
Chosen Option : 1

Q.17 Select the most appropriate option that can substitute the underlined segment in the given sentence. If there is no need to substitute it, select 'No substitution required'.

The dress may pleasantly be delivered to us at the earliest.

- Ans
- 1. might kindly
  - 2. may kindly
  - 3. No substitution required
  - 4. must pleasantly

Question ID : 65497843058  
Status : Answered  
Chosen Option : 2

Q.18 Select the option that expresses the given sentence in direct speech.

She asked me what my favourite cuisine was.

- Ans
- 1. She said to me, "What is your favourite cuisine?"
  - 2. She said to me, "What your favourite cuisine was?"
  - 3. She said to me, "What my favourite cuisine is?"
  - 4. She said to me, "What is my favourite cuisine?"

Question ID : 65497842551  
Status : Answered  
Chosen Option : 1

Q.19 Select the most appropriate ANTONYM of the given word.

Constrict

- Ans  1. Stretch  
 2. Smite  
 3. Choke  
 4. Cramp

Dots Academy

Question ID : 65497842658  
Status : Answered  
Chosen Option : 1

Q.20 Select the most appropriate option to fill in the blank.

\_\_\_\_\_ or not you allow me, I am going to the fair.

- Ans  1. Unless  
 2. Until  
 3. If  
 4. Whether

Question ID : 65497844180  
Status : Answered  
Chosen Option : 1

**Comprehension:**

In the following passage, some words have been deleted. Select the most appropriate option to fill in each blank.

Pollution is destroying nature. The smoke that is (1) \_\_\_\_\_ from the chimneys of the factories, and from vehicles is the mixture of poisonous gases. Due to environmental pollution, there is (2) \_\_\_\_\_ in nature, so, many birds, animals, and plants are on the verge of (3) \_\_\_\_\_ day by day. The only way to (4) \_\_\_\_\_ environmental pollution is to plant many trees. By planting trees, we can get rid of many harmful poisonous gases. It is the responsibility of everyone to (5) \_\_\_\_\_ and protect our environment.

**SubQuestion No : 21**

Q.21 Select the most appropriate option for blank 1.

- Ans  1. created  
 2. generated  
 3. emitted  
 4. absorbed

Question ID : 65497844162  
Status : Answered  
Chosen Option : 2

**Comprehension:**

In the following passage, some words have been deleted. Select the most appropriate option to fill in each blank.

Pollution is destroying nature. The smoke that is (1) \_\_\_\_\_ from the chimneys of the factories, and from vehicles is the mixture of poisonous gases. Due to environmental pollution, there is (2) \_\_\_\_\_ in nature, so, many birds, animals, and plants are on the verge of (3) \_\_\_\_\_ day by day. The only way to (4) \_\_\_\_\_ environmental pollution is to plant many trees. By planting trees, we can get rid of many harmful poisonous gases. It is the responsibility of everyone to (5) \_\_\_\_\_ and protect our environment.

**SubQuestion No : 22****Dots Academy****Q.22 Select the most appropriate option for blank 2.**

- Ans
- 1. an inequality
  - 2. a difference
  - 3. an imbalance
  - 4. a balance

Question ID : 65497844163  
Status : Answered  
Chosen Option : 3

**Comprehension:**

In the following passage, some words have been deleted. Select the most appropriate option to fill in each blank.

Pollution is destroying nature. The smoke that is (1) \_\_\_\_\_ from the chimneys of the factories, and from vehicles is the mixture of poisonous gases. Due to environmental pollution, there is (2) \_\_\_\_\_ in nature, so, many birds, animals, and plants are on the verge of (3) \_\_\_\_\_ day by day. The only way to (4) \_\_\_\_\_ environmental pollution is to plant many trees. By planting trees, we can get rid of many harmful poisonous gases. It is the responsibility of everyone to (5) \_\_\_\_\_ and protect our environment.

**SubQuestion No : 23****Dots Academy****Q.23 Select the most appropriate option for blank 3.**

- Ans
- 1. extinction
  - 2. survival
  - 3. appearance
  - 4. distinction

Question ID : 65497844164  
Status : Answered  
Chosen Option : 1

**Comprehension:**

In the following passage, some words have been deleted. Select the most appropriate option to fill in each blank.

Pollution is destroying nature. The smoke that is (1) \_\_\_\_\_ from the chimneys of the factories, and from vehicles is the mixture of poisonous gases. Due to environmental pollution, there is (2) \_\_\_\_\_ in nature, so, many birds, animals, and plants are on the verge of (3) \_\_\_\_\_ day by day. The only way to (4) \_\_\_\_\_ environmental pollution is to plant many trees. By planting trees, we can get rid of many harmful poisonous gases. It is the responsibility of everyone to (5) \_\_\_\_\_ and protect our environment.

**SubQuestion No : 24****Q.24 Select the most appropriate option for blank 4.**

- Ans
- 1. radiate
  - 2. introduce
  - 3. eradicate
  - 4. sustain

Question ID : 65497844165  
Status : Answered  
Chosen Option : 3

**Comprehension:**

In the following passage, some words have been deleted. Select the most appropriate option to fill in each blank.

Pollution is destroying nature. The smoke that is (1) \_\_\_\_\_ from the chimneys of the factories, and from vehicles is the mixture of poisonous gases. Due to environmental pollution, there is (2) \_\_\_\_\_ in nature, so, many birds, animals, and plants are on the verge of (3) \_\_\_\_\_ day by day. The only way to (4) \_\_\_\_\_ environmental pollution is to plant many trees. By planting trees, we can get rid of many harmful poisonous gases. It is the responsibility of everyone to (5) \_\_\_\_\_ and protect our environment.

Dots Academy

SubQuestion No : 25

Q.25 Select the most appropriate option for blank 5.

- Ans  1. preserve  
 2. neglect  
 3. ruin  
 4. destroy

Question ID : 65497844166

Status : Answered

Chosen Option : 1