

Combined Graduate Level Examination 2021 Tier - I

Roll Number	
Candidate Name	Dots Academy
Venue Name	
Exam Date	19/04/2022
Exam Time	4:00 PM - 5:00 PM
Subject	CGLE 2021 Tier I

Section : General Intelligence and Reasoning

Q.1 Which two signs need to be interchanged to make the following equation correct?

$$45 \div 15 \times 5 + 15 - 11 = 39$$

- Ans
- 1. + and ×
 - 2. ÷ and +
 - 3. - and +
 - 4. - and ×

Question ID : 65497842379

Status : Not Answered

Chosen Option : --

Q.2 Select the letter-cluster from among the given options that can replace the question mark (?) in the following series.

LJV, NMR, PPN, RSJ, ?

- Ans
- 1. SUG
 - 2. TVF
 - 3. TVN
 - 4. SWK

Question ID : 65497842161

Status : Answered

Chosen Option : 2

Q.3 Three years ago, the difference between the age of Ravish and the age of Kailash was 18 years. Three years from today, Ravish will be three times as old as Kailash. What is the present age of Ravish (in years)?

- Ans 1. 18
 2. 21
 3. 24
 4. 27

Question ID : 65497841973

Status : Answered

Chosen Option : 3

Q.4 In a certain code language, 'she needs some medicines' is written as '1542', 'take some water' is written as '849', 'he needs rest' is written as '713', and 'she is water' is written as '269'. How will 'take medicines' be written in that language?

- Ans 1. 92
 2. 81
 3. 45
 4. 85

Question ID : 65497843278

Status : Not Answered

Chosen Option : --

Q.5 Study the given pattern carefully and select the number that can replace the question mark (?) in it.

14 21 165
13 19 ?
10 17 99

- Ans 1. 156
 2. 120
 3. 140
 4. 175

Dots Academy

Question ID : 65497843287

Status : Not Answered

Chosen Option : --

Q.6 Select the option that is related to the third number in the same way as the second number is related to the first number.

3824 : 4935 :: 5716 : ?

- Ans
- 1. 6287
 - 2. 6827
 - 3. 6782
 - 4. 6087

Question ID : 65497842275

Status : Answered

Chosen Option : 2

Q.7 Select the option in which the given figure is embedded (rotation is NOT allowed).



Ans

- 1.
- 2.
- 3.
- 4.

Dots Academy

Question ID : 65497843293

Status : Answered

Chosen Option : 4

Q.8 Select the correct option that indicates the arrangement of the given words in a logical and meaningful order.

1. Recording
2. Rehearsal
3. Viewers
4. Script
5. Video Editing

- Ans
- 1. 2, 4, 1, 5, 3
 - 2. 4, 5, 2, 1, 3
 - 3. 4, 1, 2, 3, 5
 - 4. 4, 2, 1, 5, 3

Dots Academy

Question ID : 65497843071

Status : Answered

Chosen Option : 4

Q.9 Select the number from among the given options that can replace the question mark (?) in the following series.

9, 38, 154, 618, ?

- Ans
- 1. 1268
 - 2. 928
 - 3. 735
 - 4. 2474

Question ID : 65497842173

Status : Not Answered

Chosen Option : --

Q.10 Select the option that is related to the third letter-cluster in the same way as the second letter-cluster is related to the first letter-cluster.

LGS : PLY :: MKB : ?

- Ans
- 1. PQG
 - 2. QPH
 - 3. RQG
 - 4. QOF

Question ID : 65497841962

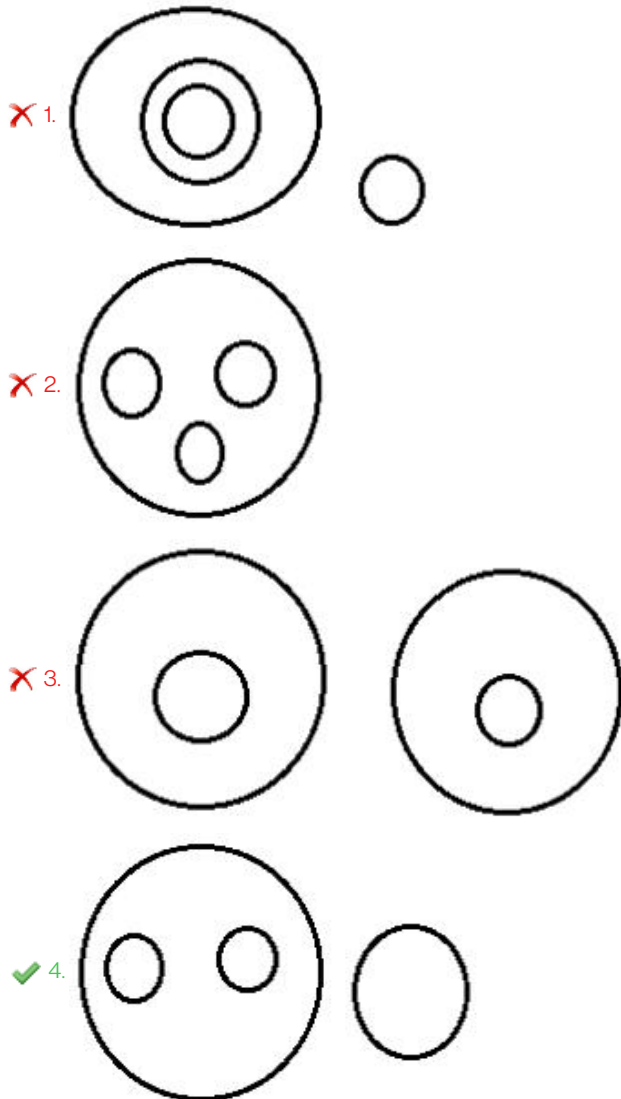
Status : Not Answered

Chosen Option : --

Q.11 Select the Venn diagram that best represents the relationship between the following.

Living organisms, Omnivores, Deer, Planet

Ans



Dots Academy

Question ID : 65497841983

Status : Answered

Chosen Option : 3

Q.12 In a certain code language, 'LILY' is coded as 116, and 'LOTUS' is coded as 174. How will 'TULIP' be coded in that language?

Ans 1. 156

2. 126

3. 168

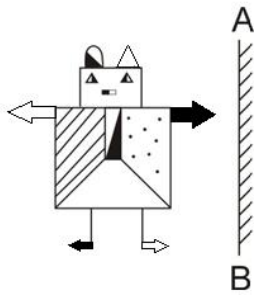
4. 78

Question ID : 65497842267

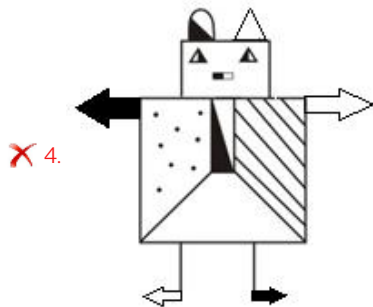
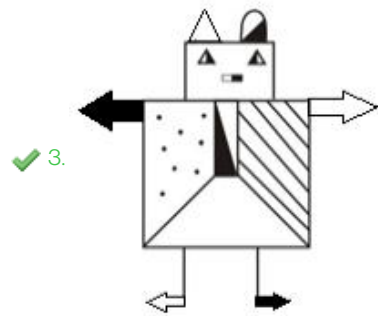
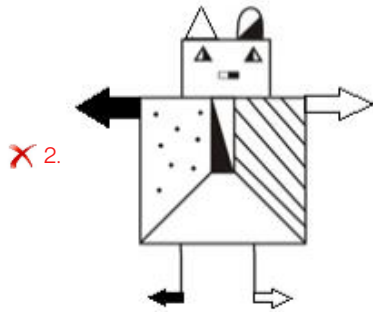
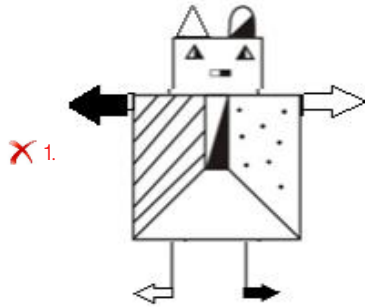
Status : Not Answered

Chosen Option : --

Q.13 Select the correct mirror image of the given figure when the mirror is placed at 'AB' as shown.



Ans



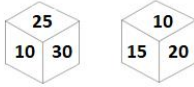
Dots Academy

Question ID : 65497842385

Status : Answered

Chosen Option : 3

Q.14 Six numbers, 5, 10, 15, 20, 25 and 30, are written on different faces of a dice. Two positions of this dice are shown.
Select the number that will be on the face opposite to the face having the number '15'.



- Ans 1. 30
 2. 10
 3. 5
 4. 20

Question ID : 65497842181

Status : **Not Answered**

Chosen Option : --

Q.15 Select the letter-cluster from among the given options that can replace the question mark (?) in the following series.

BEC, CID, FOG, KUL, ?

- Ans 1. RAR
 2. BAY
 3. RAS
 4. QOR


Dots Academy

Question ID : 65497842774

Status : **Answered**

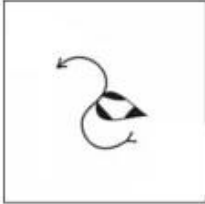
Chosen Option : **3**

Q.16 Select the figure from among the given options that can replace the question mark (?) in the following series.

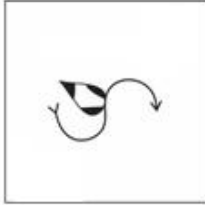


Ans

✗ 1.



✗ 2.



✗ 3.



✓ 4.



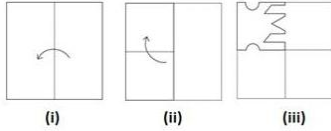
Dots Academy

Question ID : 65497842382

Status : Answered

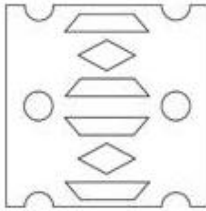
Chosen Option : 1

Q.17 The sequence of folding a piece of paper (figures i and ii) and the manner in which the folded paper has been cut (figure iii) is shown in the following figures. Select the option that would most closely resemble the unfolded form of figure (iii).

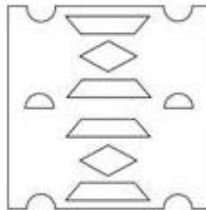


Ans

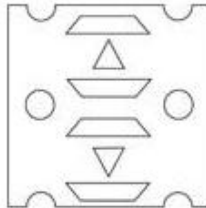
✓ 1.



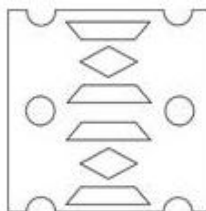
✗ 2.



✗ 3.



✗ 4.



Dots Academy

Question ID : 65497842285

Status : Not Answered

Chosen Option : --

Q.18 Six children, G, H, I, J, K, and L, are sitting around a circular table facing towards the centre. J and K are sitting to the immediate left and right of G, respectively. L is sitting to the immediate left of J, but not to the immediate right of H. Who is sitting to the immediate right of K?

- Ans**
- ✗ 1. L
 - ✗ 2. J
 - ✗ 3. I
 - ✓ 4. H

Question ID : 65497842372

Status : Answered

Chosen Option : 3

Q.19 Four letter-clusters have been given, out of which three are alike in some manner and one is different. Select the letter-cluster that is different.

- Ans
- 1. HAUPL
 - 2. YRLGC
 - 3. GZTNK
 - 4. ATNIE

Question ID : 65497843274

Status : Answered

Chosen Option : 1

Q.20 Read the given statements and conclusions carefully. Assuming that the information given in the statements is true, even if it appears to be at variance with commonly known facts, decide which of the given conclusions logically follow(s) from the statements.

Statements:

- All rabbits are cows.
- Some rabbits are cats.

Conclusions:

- I. All cats are rabbits.
- II. Some cows are rabbits.

- Ans
- 1. Both the conclusions follow.
 - 2. Only conclusion I follows.
 - 3. Only conclusion II follows.
 - 4. Either conclusion I or II follows.


Dots Academy

Question ID : 65497842171

Status : Answered


Chosen Option : 4

Q.21 Which of the option figures, when rotated 135° clockwise followed by 45° anticlockwise, will result in the given question figure?




Ans


✗ 1.




✗ 2.



✓ 3.



✗ 4.



Dots Academy

Question ID : 65497842280

Status : Not Answered

Chosen Option : --

Q.22 Select the number from among the given options that can replace the question mark (?) in the following series.

35, 54, 77, 106, 137, ?

- Ans
- 1. 170
 - 2. 179
 - 3. 174
 - 4. 151

Dots Academy

Question ID : 65497843283

Status : Not Answered

Chosen Option : --

Q.23 Niraj is the father of Rinku. Jiya and Tiya are the daughters of Ruby, who is the only sister of Rinku. Vishnu is the son of Rinku and Gita. How is Niraj related to Tiya?

- Ans
- 1. Maternal uncle
 - 2. Paternal uncle
 - 3. Maternal grandfather
 - 4. Paternal grandfather

Question ID : 65497842371

Status : Not Answered

Chosen Option : --

Q.24 If '@' means 'addition', '%' means 'multiplication', '\$' means 'division', and '#' means 'subtraction', then find the value of the following expression.

9 @ 114 \$ 19 % 5 # 21

- Ans
- 1. 32
 - 2. 18
 - 3. 20
 - 4. 26

Question ID : 65497842178

Status : Answered

Chosen Option : 2

Q.25 In a certain code language, 'COLOUR' is written as 'FQQXT' and 'VIOLET' is written as 'YKRNHV'. How will 'PURPLE' be written in that language?

- Ans
- 1. RWUSPH
 - 2. RXWSOH
 - 3. SWUROG
 - 4. SXUSOG

Question ID : 65497842771

Status : Answered

Chosen Option : 3

Q.1 _____ is an environmental policy under which producers are given a significant responsibility – financial and/or physical – for the treatment or disposal of products that are no longer useful to the consumer.

- Ans
- 1. Ethical Producer Responsibility
 - 2. Producers' Environmental Responsibility
 - 3. Extended Producer Responsibility
 - 4. Post-consumer Environmental Responsibility

Question ID : 65497841994

Status : Not Answered

Chosen Option : --

Q.2 The system of MSP (Minimum Support Price) was first introduced for _____ in 1966-67 and later expanded to include other essential food crops.

- Ans
- 1. wheat
 - 2. ragi
 - 3. jowar
 - 4. bajra

Question ID : 65497841987

Status : Not Answered

Chosen Option : --

Q.3 Organisms belonging to the phylum _____ are also called 'flatworms'.

- Ans
- 1. Ctenophora
 - 2. Cnidaria
 - 3. Porifera
 - 4. Platyhelminthes

Question ID : 65497842191

Status : Answered

Chosen Option : 2

Q.4 Which of the following is a folk song genre popular in parts of West Bengal, Assam and Bangladesh?

- Ans
- 1. Chalo
 - 2. Bhawaiya
 - 3. Rekham Pada
 - 4. Roppi

Dots Academy

Question ID : 65497843297

Status : Not Answered

Chosen Option : --

Q.5 Which of the following pairs of Indian revolutionaries and organisations is CORRECTLY paired?

- Ans
- 1. Mahadev Govind Ranade – Madras Mahajana Sabha
 - 2. Surendranath Banerjee – East India Association
 - 3. M Veera Raghavachari – Poona Sarvajanik Sabha
 - 4. Badruddin Tyabji – Bombay Presidency Association

Question ID : 65497842201

Status : Not Answered

Chosen Option : --

Q.6 Carbon monoxide contains approximately ____ of oxygen for each 1.00 g of carbon.

- Ans
- 1. 4.11 g
 - 2. 2.66 g
 - 3. 1.33 g
 - 4. 0.23 g

Question ID : 65497841992

Status : Not Answered

Chosen Option : --

Q.7 In which of the following forts was Razia Sultan imprisoned by Malik Ikhtiyar-ud-din Altunia?

- Ans
- 1. Qila Mubarak in Bathinda
 - 2. Golconda fort in Golconda
 - 3. Jaigarh fort in Jaipur
 - 4. Mehrangarh fort in Jodhpur

Dots Academy

Question ID : 65497843311

Status : Not Answered

Chosen Option : --

Q.8 Who among the following leaders of Indian Freedom Movement gave the slogan 'Freedom is my birthright and I shall have it'?

- Ans
- 1. Gopalkrishna Gokhale
 - 2. Subhash Chandra Bose
 - 3. Bal Gangadhar Tilak
 - 4. Lala Lajpat Rai

Question ID : 65497842303

Status : Answered

Chosen Option : 2

Q.9 Which of the following titles was held by Prince Phillip, the late husband of Queen Elizabeth II, until his death in April 2021?

- Ans
- 1. Duke of Windsor
 - 2. Duke of Gloucester
 - 3. Duke of Cambridge
 - 4. Duke of Edinburgh

Question ID : 65497842405

Status : Not Answered

Chosen Option : --

Q.10 Mountaineers refer to altitudes above about ____ metres as the 'death zone'.

- Ans
- 1. 8,000
 - 2. 7,200
 - 3. 6,700
 - 4. 5,800

Question ID : 65497842198

Status : Not Answered

Chosen Option : --

Q.11 Article ____ of the Indian Constitution states that 'there shall be a Commission for the socially and educationally backward classes to be known as the National Commission for Backward Classes'.

- Ans
- 1. 338B (1)
 - 2. 124A (1)
 - 3. 243S (1)
 - 4. 243Y (1)

Question ID : 65497842409

Status : Answered

Chosen Option : 2

Q.12 'Hypnea indica' and 'Hypnea bullata' are types of :

- Ans
- 1. yellow seaweeds
 - 2. green seaweeds
 - 3. black seaweeds
 - 4. red seaweeds

Dots Academy

Question ID : 65497843303

Status : Not Answered

Chosen Option : --

Q.13 _____ was among 12 people chosen for the 'International Anti-Corruption Champions Award' constituted by the United States Department of State in February 2021.

- Ans
- 1. Medha Patkar
 - 2. Anjali Bhardwaj
 - 3. Flavia Agnes
 - 4. Archana Borthakur

Question ID : 65497842003
Status : Not Answered
Chosen Option : --

Q.14 Who among the following persons is NOT a co-author of the book 'Till We Win: India's Fight Against the Covid-19 Pandemic'?

- Ans
- 1. Dr Gagandeep Kang
 - 2. Dr Randeep Guleria
 - 3. Dr Soumya Swaminathan
 - 4. Dr Chandrakant Lahariya

Question ID : 65497842305
Status : Not Answered
Chosen Option : --

Q.15 Who among the following is an Indian professional tennis player?

- Ans
- 1. Ankita Raina
 - 2. Shanti Mallick
 - 3. Bala Devi
 - 4. Aditi Chauhan

Dots Academy

Question ID : 65497842209
Status : Not Answered
Chosen Option : --

Q.16 Which of the following rivers flow through both the states, West Bengal and Sikkim?

- Ans
- 1. Koshi
 - 2. Hooghly
 - 3. Sone
 - 4. Teesta

Question ID : 65497843310
Status : Not Answered
Chosen Option : --

Q.17 Irrespective of the source, pure water contains ____ of oxygen by mass.

- Ans 1. 88.89%
 2. 56.83%
 3. 11.11%
 4. 35.42%

Question ID : 65497842294

Status : Not Answered

Chosen Option : --

Q.18 The Central Board of Directors of the Reserve Bank of India are appointed for a term of ____ years.

- Ans 1. two
 2. four
 3. three
 4. five

Question ID : 65497842289

Status : Not Answered

Chosen Option : --

Q.19 As per National Family Health Survey 5, ____ is the only state with a sex ratio at birth for children born in the last five years (urban + rural), above 1,000.

- Ans 1. Andhra Pradesh
 2. Himachal Pradesh
 3. Tripura
 4. Goa

Question ID : 65497842399

Status : Not Answered

Chosen Option : --

Q.20 In which of the following years Motilal Nehru along with eight other congress leaders drafted a Constitution for India?

- Ans 1. 1935
 2. 1931
 3. 1928
 4. 1945

Question ID : 65497843319

Status : Not Answered

Chosen Option : --

Q.21 One mole of an ideal gas occupies a volume of ____ litre at 273 K and 1 atm pressure.

- Ans
- 1. 20.3
 - 2. 25.1
 - 3. 22.4
 - 4. 21.2

Question ID : 65497842397

Status : Not Answered

Chosen Option : --

Q.22 In May 2020, the Government of India announced a special economic and comprehensive package equivalent to ____ of India's GDP under Atmanirbhar Bharat Abhiyan.

- Ans
- 1. 20%
 - 2. 25%
 - 3. 15%
 - 4. 10%

Question ID : 65497842392

Status : Not Answered

Chosen Option : --

Q.23 ____ is an annual three-day festival held at Bara Shaheed Dargah in Nellore.

- Ans
- 1. Bheldiya
 - 2. Ali Ai Ligang
 - 3. Baishagu
 - 4. Rottela Panduga

Dots Academy

Question ID : 65497842187

Status : Not Answered

Chosen Option : --

Q.24 ____ ranked first on Forbes' list of 'Highest-Paid Female Athletes 2020'.

- Ans
- 1. Ashleigh Barty
 - 2. Naomi Osaka
 - 3. Alex Morgan
 - 4. Serena Williams

Question ID : 65497842008

Status : Not Answered

Chosen Option : --

Q.25 The ____ Amendment Act of the Constitution of India introduced the Goods and Services Tax (GST) in India.

- Ans
- 1. 92nd
 - 2. 98th
 - 3. 104th
 - 4. 101st

Question ID : 65497842307

Status : Not Answered

Chosen Option : --

Section : Quantitative Aptitude

Q.1 Find the value of k such that the number $k53206k$ is divisible by 6.

- Ans
- 1. 1
 - 2. 4
 - 3. 7
 - 4. 2

Question ID : 65497842211

Status : Not Answered

Chosen Option : --

Q.2 20 men can finish a work in 30 days. They started working, but 4 men left the work after 10 days. In how many days would the work be completed?

- Ans
- 1. 28
 - 2. 25
 - 3. 35
 - 4. 30

Dots Academy

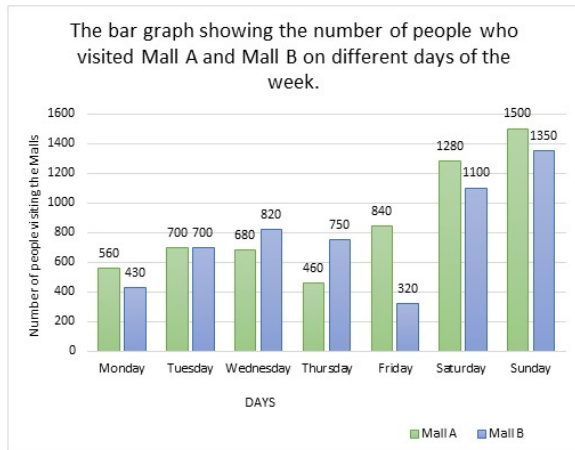
Question ID : 65497842422

Status : Not Answered

Chosen Option : --

Q.3

The bar graph shows the number of people who visited Mall A and Mall B on different days of a week.



Dots Academy

What is the ratio of the number of people visiting Mall A on Thursday, Saturday and Sunday together to the number of people visiting Mall B on these three days together?

- Ans
- 1. 25 : 27
 - 2. 81 : 80
 - 3. 80 : 81
 - 4. 27 : 25

Question ID : 65497843244

Status : Not Answered

Chosen Option : --

Q.4 If $\cot^2 \alpha + \tan^2 \alpha = 2$, $0^\circ \leq \alpha \leq 90^\circ$, then find the value of α

- Ans
- 1. 0°
 - 2. 45°
 - 3. 60°
 - 4. 90°

Question ID : 65497842330

Status : Not Answered

Chosen Option : --

Q.5 A shopkeeper bought 60 pencils at a rate of 4 for ₹5 and another 60 pencils at a rate of 2 for ₹3. He mixed all the pencils and sold them at a rate of 3 for ₹4. Find his gain or loss percentage.

- Ans
- ✓ 1. Loss $3\frac{1}{33}\%$
 - ✗ 2. Profit $3\frac{1}{8}\%$
 - ✗ 3. Loss $2\frac{7}{8}\%$
 - ✗ 4. Profit $2\frac{7}{8}\%$

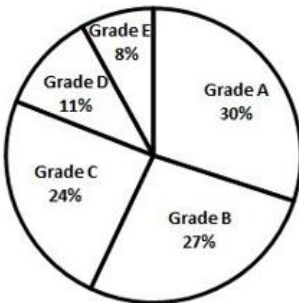
Question ID : 65497842419

Status : Not Answered

Chosen Option : --

Q.6 Performance of 1800 students in grades has been shown in the following pie chart.

How many students have got either grade D or grade E?



- Ans
- ✓ 1. 342
 - ✗ 2. 359
 - ✗ 3. 345
 - ✗ 4. 352

Dots Academy

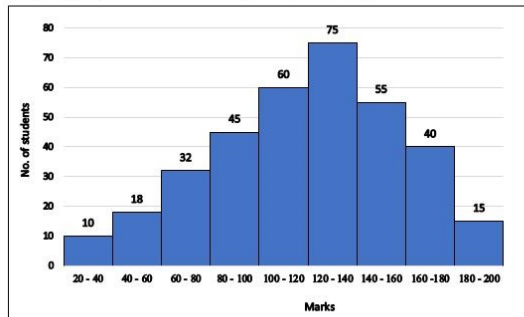
Question ID : 65497842031

Status : Not Answered

Chosen Option : --

- Q.7 The given histogram represents the marks of students in Mathematics test of a certain class. The total number of students is 350 and the maximum marks of the test are 200.

Study the graph and answer the question that follows.



The total number of students whose marks are less than 100 is what percentage (correct up to one place of decimal) less than the total number of students whose marks are 120 and above?

- Ans
- ✓ 1. 43.2%
 - ✗ 2. 36.6%
 - ✗ 3. 32.7%
 - ✗ 4. 51.8%

Dots Academy

Question ID : 65497843346

Status : Not Answered

Chosen Option : --

- Q.8 If $(x + y)^3 - (x - y)^3 - 3y(2x^2 - 3y^2) = ky^3$, then find the value of k .

- Ans
- ✓ 1. 11
 - ✗ 2. 10
 - ✗ 3. 10.5
 - ✗ 4. 8

Question ID : 65497842425

Status : Not Answered

Chosen Option : --

- Q.9 A and B entered into a partnership with certain investments. At the end of 8 months, A withdrew and collected back his money. A and B received profit in the ratio 5 : 9 at the end of the year. If B had invested ₹36,000, then how much (in ₹) had A invested?

- Ans
- ✗ 1. 25,000
 - ✗ 2. 20,000
 - ✗ 3. 36,000
 - ✓ 4. 30,000

Question ID : 65497842319

Status : Not Answered

Chosen Option : --

Q.10 Simplify the following expression:

$$\frac{\cos A}{1 - \tan A} + \frac{\sin A}{1 - \cot A} - \sin A$$

Ans 1. $1 + \cos A$

2. $(1 + \sin A) \cos A$

3. $\cos A$

4. $1 + \sin A$

Question ID : 65497842432

Status : Not Answered

Chosen Option : --

Q.11 Find the value of the following expression:

$$\frac{1\frac{2}{3} \div \frac{5}{6} \times 6 + \frac{4}{5} \times \frac{1}{2} + \frac{2}{3}}{2 - \left[1\frac{1}{3} \times \left(-\frac{3}{5}\right) - 6 \left\{ \frac{3}{5} - \left(3 - \frac{3}{10} \right) \right\} \right]}$$

Ans 1. $-\frac{1}{7}$

2. $-\frac{4}{3}$

3. $\frac{4}{3}$

4. $\frac{1}{7}$

Dots Academy

Question ID : 65497842011

Status : Not Answered

Chosen Option : --

Q.12 In a right-angled triangle, the lengths of the medians from the vertices of acute angles are 7 cm and $4\sqrt{6}$ cm. What is the length of the hypotenuse of the triangle (in cm)?

Ans 1. $\frac{5}{2}\sqrt{29}$

2. $\sqrt{29}$

3. $2\sqrt{29}$

4. $3.5 + 2\sqrt{6}$

Question ID : 65497842430

Status : Not Answered

Chosen Option : --

Q.13 Find the greatest 3-digit number which, when divided by 3, 4, 5 and 8, leaves remainder 2 in each case.

- Ans
- 1. 958
 - 2. 122
 - 3. 482
 - 4. 962

Question ID : 65497842010

Status : Not Answered

Chosen Option : --

Q.14 In a circle with centre O and of radius 13 cm, two parallel chords are drawn on different sides of the centre. If the length of one chord is 10 cm and the distance between the two chords is 17 cm, then find the difference in lengths of the two chords (in cm).

- Ans
- 1. 12
 - 2. 10
 - 3. 24
 - 4. 14

Dots Academy

Question ID : 65497842226

Status : Not Answered

Chosen Option : --

Q.15 AB is a chord of a circle with centre O. C is a point on the circumference of the circle in the minor sector. If $\angle ABO = 40^\circ$, what is the measure (in degree) of $\angle ACB$?

- Ans
- 1. 110°
 - 2. 130°
 - 3. 100°
 - 4. 120°

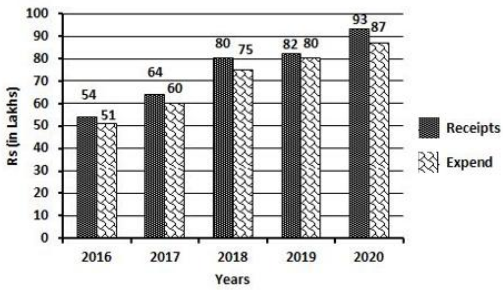
Question ID : 65497843336

Status : Not Answered

Chosen Option : --

Q.16 The following bar graph shows receipts and expenditure by a business firm over 5 years. Gain = Receipts – Expenditure.

In which year did the company gain the maximum amount?



Dots Academy

- Ans
- 1. 2017
 - 2. 2020
 - 3. 2018
 - 4. 2016

Question ID : 65497842030

Status : Not Answered

Chosen Option : --

Q.17 Two successive discounts of 20% and 25% on the marked price of an article are equal to a single discount of ₹250. If the marked price of the article is 25% above the cost price, the cost price (in ₹) of the article is:

- Ans
- 1. 500
 - 2. 600
 - 3. 450
 - 4. 550

Question ID : 65497843023

Status : Not Answered

Chosen Option : --

Q.18 What is the angle of elevation of the sun when the shadow of a 9-m high pole is $3\sqrt{3}$ m long?

- Ans
- 1. 90°
 - 2. 60°
 - 3. 45°
 - 4. 30°

Question ID : 65497842029

Status : Not Answered

Chosen Option : --

Q.19 The average of twelve numbers is 42. The average of the last five numbers is 40, and that of the first four numbers is 44. The sixth number is 6 less than the fifth number and 5 less than the seventh number. The average of the sixth and seventh numbers is:

- Ans
- 1. 45.5
 - 2. 43.5
 - 3. 41.5
 - 4. 44.5

Question ID : 65497844335

Status : Not Answered

Chosen Option : --

Q.20 The length of a wire (in cm) of 0.1 mm radius that can be drawn from melting a solid copper sphere of diameter 6 cm is:

- Ans
- 1. 250000
 - 2. 440000
 - 3. 810000
 - 4. 360000

Question ID : 65497844343

Status : Not Answered

Chosen Option : --

Q.21 In a triangle ABC, the bisector of angle BAC meets BC at point D such that $DC = 2BD$. If $AC - AB = 5$ cm, then find the length of AB (in cm).

- Ans
- 1. 5
 - 2. 12
 - 3. 10
 - 4. 7

Dots Academy

Question ID : 65497842328

Status : Not Answered

Chosen Option : --

Q.22 Akhil rides first 12 km at a speed of 16 km/h and further 6 km at a speed of 20 km/h. Find his average speed (in km/h).

Ans

✗ 1. $16\frac{4}{5}$

✓ 2. $17\frac{1}{7}$

✗ 3. $17\frac{1}{2}$

✗ 4. $18\frac{1}{5}$

Dots Academy

Question ID : 65497842322

Status : Not Answered

Chosen Option : --

Q.23 A fruit seller sells 45% of the oranges that he has along with one more orange to a customer. He then sells 20% of the remaining oranges and 2 more oranges to a second customer. He then sells 90% of the now remaining oranges to a third customer and is still left with 5 oranges. How many oranges did the fruit seller have initially?

Ans

✗ 1. 121

✓ 2. 120

✗ 3. 111

✗ 4. 100

Question ID : 65497842216

Status : Not Answered

Chosen Option : --

Q.24 If $a + b + c = 11$ and $ab + bc + ca = 28$, then find the value of $a^3 + b^3 + c^3 - 3abc$.

Ans

✗ 1. 1639

✗ 2. 1093

✗ 3. 2255

✓ 4. 407

Question ID : 65497842325

Status : Not Answered

Chosen Option : --

Q.25 What is the compound interest (in ₹) at the rate of 10%, compounded annually, for 3 years on the principal which in 8 years at the rate of 12% per annum gives ₹4,800 as simple interest?

- Ans 1. 1,655
 2. 2,045
 3. 1,505
 4. 1,455

Question ID : 65497843330

Status : Not Answered

Chosen Option : --

Section : English Comprehension

Q.1 Select the most appropriate meaning of the given idiom.

A snake in the grass

- Ans 1. A sudden death
 2. A hidden enemy
 3. A good fortune
 4. An unfortunate accident

Question ID : 65497843368

Status : Answered

Chosen Option : 2

Q.2 The following sentence has been split into segments. One of them may contain an error. Identify the segment that contains a grammatical error. If you don't find any error, mark 'No error' as your answer.

He was formerly / a doctor of / the corporate hospital.

- Ans 1. the corporate hospital
 2. a doctor of
 3. No error
 4. He was formerly

Dots Academy

Question ID : 65497842339

Status : Not Answered

Chosen Option : --

Q.3 Select the most appropriate synonym of the given word.

Tranquil

- Ans 1. Calm
 2. Dazed
 3. Aware
 4. Alert

Question ID : 65497842354

Status : Not Answered

Chosen Option : --

Q.4 Select the option that expresses the given sentence in direct speech.

The guard told the children to stay away from the flower beds.

- Ans 1. The guard says to the children, "Stay away from the flower beds."
 2. The guard told to the children, "Stay away from the flower beds."
 3. The guard said, "Children, should you stay away from the flower beds."
 4. The guard said, "Children, stay away from the flower beds."

Dots Academy

Question ID : 65497843359

Status : Answered

Chosen Option : 1

Q.5 Select the most appropriate meaning of the given idiom.

Blow your own trumpet

- Ans 1. Play on your instrument
 2. Practise playing music
 3. Boast about one's own qualities
 4. Keep away the dust from your instruments

Question ID : 65497842256

Status : Not Answered

Chosen Option : --

Q.6 Select the correct active voice of the given sentence.

The watchman has been bitten by a stray dog.

- Ans 1. A stray dog bit the watchman.
 2. A stray dog has bitten the watchman.
 3. A watchman has bitten the stray dog.
 4. A stray dog is biting the watchman.

Question ID : 65497842342

Status : Answered

Chosen Option : 1

Q.7 Select the option that expresses the given sentence in active voice.

I have been informed of their decision.

- Ans
- 1. They had informed me of their decision.
 - 2. They are informing me of their decision.
 - 3. They informed me of their decision.
 - 4. They have informed me of their decision.

Question ID : 65497842038

Status : Answered

Chosen Option : 4

Q.8 Select the option that can be used as a one-word substitute for the given group of words.

Able to be happy, successful, etc. again after something difficult or bad has happened

- Ans
- 1. Reluctant
 - 2. Resistant
 - 3. Resilient
 - 4. Remnant

Question ID : 65497842461

Status : Not Answered

Chosen Option : --

Q.9 Identify the segment in the sentence which contains the grammatical error.

Smita lived in this house since she was five years old.

- Ans
- 1. Smita lived
 - 2. in this house
 - 3. five years old
 - 4. since she was

Question ID : 65497843350

Status : Answered

Chosen Option : 1

Q.10 Sentences of a paragraph are given below in jumbled order. Arrange the sentences in the correct order to form a meaningful and coherent paragraph.

- A. They always shared machinery and goods as needed without a hitch.
- B. Then they had the first serious quarrel in 40 years of farming side by side.
- C. And unfortunately, the long collaboration fell apart.
- D. Two brothers lived on adjoining farms in a small village.

- Ans
- 1. DABC
 - 2. DBCA
 - 3. CADB
 - 4. BCAD

Dots Academy

Question ID : 65497842049

Status : Answered

Chosen Option : 1

Q.11 Select the most appropriate option to substitute the underlined segment in the given sentence. If there is no need to substitute it, select 'No substitution required'.

Hardly had we get in but the train started.

- Ans
- 1. we get in than
 - 2. we got in before
 - 3. we got in when
 - 4. No substitution required

Question ID : 65497842249

Status : Answered

Chosen Option : 3

Q.12 Select the option that can be used as a one-word substitute for the given group of words.

An animal with a spinal cord

- Ans
- 1. Invertebrate
 - 2. Amphibian
 - 3. Mammal
 - 4. Vertebrate

Question ID : 65497842359

Status : Answered

Chosen Option : 4

Q.13 The following sentence has been split into segments. One of them may contain an error. Identify the segment that contains a grammatical error. If you don't find any error, mark 'No error' as your answer.

A shop nearby / sell all the goods / of daily use.

- Ans 1. sell all the goods
 2. A shop nearby
 3. of daily use
 4. No error

Dots Academy

Question ID : 65497842135

Status : Answered

Chosen Option : 1

Q.14 Select the INCORRECTLY spelt word.

- Ans 1. Announcement
 2. Anguish
 3. Annivarsary
 4. Anonymous

Question ID : 65497842361

Status : Answered

Chosen Option : 3

Q.15 Select the most appropriate option to fill in the blank.

They called Mohan a _____ because he did not want to go into the dark lane.

- Ans 1. coward
 2. hero
 3. brave
 4. valiant

Question ID : 65497842463

Status : Answered

Chosen Option : 1

Q.16 Select the most appropriate ANTONYM of the given word.

Feeble

- Ans 1. Fickle
 2. Fast
 3. Strong
 4. Wild

Question ID : 65497842254

Status : Not Answered

Chosen Option : --

Q.17 Select the most appropriate option that can substitute the underlined segment in the given sentence. If there is no need to substitute it, select 'No substitution required'.

I can't make out my mind about taking a vacation in winter.

- Ans 1. make up
 2. No substitution required
 3. make on
 4. made out

Question ID : 65497842048
Status : Not Answered
Chosen Option : --

Q.18 Select the most appropriate ANTONYM of the given word.

Famished

- Ans 1. Volatile
 2. Hesitant
 3. Starved
 4. Satiated

Question ID : 65497843366
Status : Not Answered
Chosen Option : --

Q.19 Identify the segment in the sentence which contains the grammatical error.

Our team have won the match.

- Ans 1. won
 2. Our team
 3. the match
 4. have

Question ID : 65497843348
Status : Answered
Chosen Option : 4

Q.20 Select the most appropriate synonym of the given word.

Arid

- Ans 1. Fertile
 2. Dry
 3. Lively
 4. Damp

Question ID : 65497842050
Status : Not Answered
Chosen Option : --

Dots Academy

Comprehension:

In the following passage, some words have been deleted. Read the passage carefully and select the most appropriate option to fill in each blank.

A banker taped a picture, drawn by one of his small children, to his office wall. When he 1. _____ at work the next morning, he found the 2. _____ was covered by a 3. _____ notice, saying he was in 4. _____ of company policy which required personal items to be put away at night. 5. _____ a reaction was not just petty, it risked demotivating the banker completely. In short, it defied common sense.

SubQuestion No : 21

Q.21 Select the most appropriate option to fill in blank no. 1.

- Ans 1. reached
 2. turned
 3. achieved
 4. arrived

Question ID : 65497842445

Status : Answered

Chosen Option : 1

Comprehension:

In the following passage, some words have been deleted. Read the passage carefully and select the most appropriate option to fill in each blank.

A banker taped a picture, drawn by one of his small children, to his office wall. When he 1. _____ at work the next morning, he found the 2. _____ was covered by a 3. _____ notice, saying he was in 4. _____ of company policy which required personal items to be put away at night. 5. _____ a reaction was not just petty, it risked demotivating the banker completely. In short, it defied common sense.

SubQuestion No : 22

Q.22 Select the most appropriate option to fill in blank no. 2.

- Ans 1. tape
 2. child
 3. office
 4. picture

Dots Academy

Question ID : 65497842446

Status : Answered

Chosen Option : 4

Comprehension:

In the following passage, some words have been deleted. Read the passage carefully and select the most appropriate option to fill in each blank.

A banker taped a picture, drawn by one of his small children, to his office wall. When he 1. _____ at work the next morning, he found the 2. _____ was covered by a 3. _____ notice, saying he was in 4. _____ of company policy which required personal items to be put away at night. 5. _____ a reaction was not just petty, it risked demotivating the banker completely. In short, it defied common sense.

SubQuestion No : 23

Q.23 Select the most appropriate option to fill in blank no. 3.

- Ans 1. substantial
 2. considerable
 3. large
 4. generous

Question ID : 65497842447

Status : **Not Answered**

Chosen Option : --

Comprehension:

In the following passage, some words have been deleted. Read the passage carefully and select the most appropriate option to fill in each blank.

A banker taped a picture, drawn by one of his small children, to his office wall. When he 1. _____ at work the next morning, he found the 2. _____ was covered by a 3. _____ notice, saying he was in 4. _____ of company policy which required personal items to be put away at night. 5. _____ a reaction was not just petty, it risked demotivating the banker completely. In short, it defied common sense.

SubQuestion No : 24

Q.24 Select the most appropriate option to fill in blank no. 4.

- Ans 1. interruption
 2. violation
 3. disruption
 4. damage

Dots Academy

Question ID : 65497842448

Status : **Not Answered**

Chosen Option : --

Comprehension:

In the following passage, some words have been deleted. Read the passage carefully and select the most appropriate option to fill in each blank.

A banker taped a picture, drawn by one of his small children, to his office wall. When he 1. _____ at work the next morning, he found the 2. _____ was covered by a 3. _____ notice, saying he was in 4. _____ of company policy which required personal items to be put away at night. 5. _____ a reaction was not just petty, it risked demotivating the banker completely. In short, it defied common sense.

SubQuestion No : 25

Q.25 Select the most appropriate option to fill in blank no. 5.

Ans 1. Such

2. This

3. Which

4. That

Dots Academy

Question ID : 65497842449

Status : Answered

Chosen Option : 1