

Combined Graduate Level Examination 2021 Tier - I

Roll Number	
Candidate Name	
Venue Name	Dots Academy
Exam Date	21/04/2022
Exam Time	12:30 PM - 1:30 PM
Subject	CGLE 2021 Tier I

Section : General Intelligence and Reasoning

Q.1 Read the given statements and conclusions carefully. Assuming that the information given in the statements is true, even if it appears to be at variance with commonly known facts, decide which of the given conclusions logically follow(s) from the statements.

Statements:

Some spades are knives.
All knives are rakes.

Conclusions:

I. Some knives are spades.
II. Some rakes are knives.

- Ans**
- 1. Only conclusion I follows.
 - 2. Only conclusion II follows.
 - 3. Both conclusions I and II follow.
 - 4. Neither conclusion I nor II follows.

Question ID : 65497844191

Status : Answered

Chosen Option : 3

Q.2 Four letter-clusters have been given, out of which three are alike in some manner and one is different. Select the one that is different.

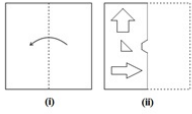
- Ans**
- 1. QSH
 - 2. CEV
 - 3. KMN
 - 4. MPI

Question ID : 65497842870

Status : Answered

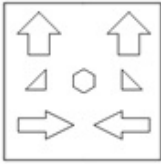
Chosen Option : 4

Q.3 The sequence of folding a piece of paper (figure i) and the manner in which the folded paper has been cut (figure ii) is shown in the following figures. Select the option that would most closely resemble the unfolded form of figure (ii).

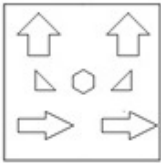


Ans

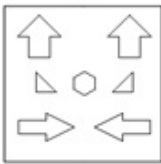
1.



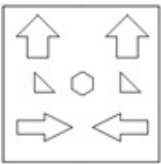
2.



3.



4.



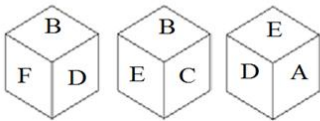
Dots Academy

Question ID : 65497842184

Status : Answered

Chosen Option : 3

Q.4 Three different positions of the same dice are shown. Select the letter that will be on the face opposite to the face having the letter 'C'.



Ans

1. E

2. A

3. B

4. D

Question ID : 65497844201

Status : Answered

Chosen Option : 4

Q.5 Which two numbers (NOT digits) need to be interchanged to make the following equation correct?

$$8 + 48 \div 12 \times 5 - 13 = 29$$

- Ans
- 1. 13 and 8
 - 2. 8 and 12
 - 3. 12 and 13
 - 4. 8 and 5

Question ID : 65497842682
Status : Answered
Chosen Option : 2

Q.6 Select the number from among the given options that can replace the question mark (?) in the following series.

14, 20, 34, 72, 182, ?

- Ans
- 1. 580
 - 2. 508
 - 3. 380
 - 4. 308

Dots Academy

Question ID : 65497844193
Status : Not Answered
Chosen Option : --

Q.7 If 80% of a number is 768, what will be 40% of 5% of that number?

- Ans
- 1. 20.6
 - 2. 16.4
 - 3. 13.5
 - 4. 19.2

Question ID : 65497842781
Status : Answered
Chosen Option : 4

Q.8 Select the letter-cluster from among the given options that can replace the question mark (?) in the following series.

CLAY, DIFX, EFKW, FCPV, ?

- Ans
- 1. HUZT
 - 2. GZUU
 - 3. HZUW
 - 4. GUZU

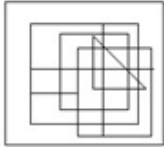
Question ID : 65497844181
Status : Not Answered
Chosen Option : --

Q.9 Select the option in which the given figure is embedded (rotation is NOT allowed).

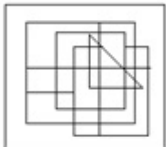


Ans

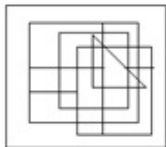
✓ 1.



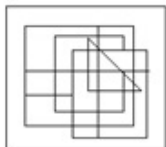
✗ 2.



✗ 3.



✗ 4.



Dots Academy

Question ID : 65497842889

Status : Not Answered

Chosen Option : --

Q.10 Select the option that is related to the third letter-cluster in the same way as the second letter-cluster is related to the first letter-cluster.

GTQ : JVP :: SDK : ?

Ans ✗ 1. UEK

✗ 2. VGK

✓ 3. VFJ

✗ 4. UGF

Question ID : 65497842770

Status : Not Answered

Chosen Option : --

Q.11 Four friends, H, I, J and K, are sitting at the four corners of a square facing towards the centre. H and J are sitting at diagonally opposite corners. I is sitting to the immediate left of H. Who is sitting to the immediate right of J?

Ans ✗ 1. J

✓ 2. I

✗ 3. K

✗ 4. H

Question ID : 65497842675

Status : Answered

Chosen Option : 2

Q.12 In a certain code, 'Tim Dim Kim' means 'India Is Big' and 'Dim Gim Kim Se Rim' means 'Tiger Is A Big Cat'. Which of the following is the code for 'India'?

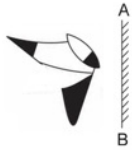
- Ans
- 1. Gim
 - 2. Kim
 - 3. Dim
 - 4. Tim

Question ID : 65497842874

Status : Not Answered

Chosen Option : --

Q.13 Select the correct mirror image of the given figure when the mirror is placed at 'AB' as shown.



Ans

- 1.
- 2.
- 3.
- 4.

Dots Academy

Question ID : 65497842688

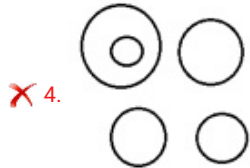
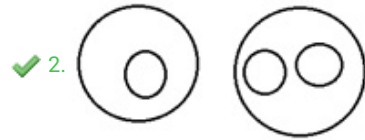
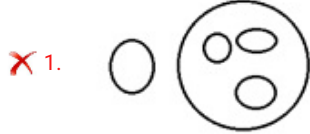
Status : Answered

Chosen Option : 3

Q.14 Select the Venn diagram that best represents the relationship between the following.

Infectious diseases, Deficiency diseases, Goitre, Rickets, Chickenpox.

Ans



Dots Academy

Question ID : 65497842791

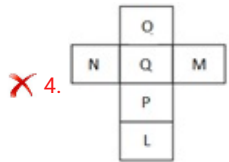
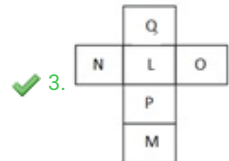
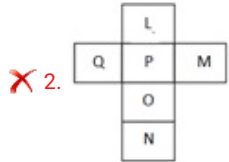
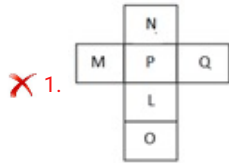
Status : Answered

Chosen Option : 2

Q.15 Two orientations of the same box are shown. How will this box look when unfolded?



Ans



Dots Academy

Question ID : 65497842179

Status : Answered

Chosen Option : 3

Q.16 Which two signs should be interchanged to make the given equation correct?

$$13+15\times 8\div 96-4=109$$

Ans ✗ 1. + and ÷

✓ 2. ÷ and -

✗ 3. - and +

✗ 4. × and -

Question ID : 65497844198

Status : Not Answered

Chosen Option : --

Q.17 Select the correct option that indicates the arrangement of the given words in the order in which they appear in an English dictionary.

1. Malice
2. Malignant
3. Mallows
4. Malfunction
5. Malware

- Ans
- 1. 1, 4, 3, 2, 5
 - 2. 4, 2, 1, 3, 5
 - 3. 4, 1, 2, 5, 3
 - 4. 4, 1, 2, 3, 5

Dots Academy

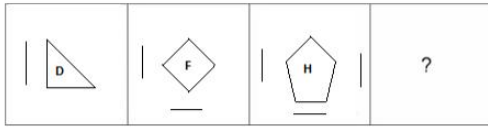
Question ID : 65497842970
Status : Answered
Chosen Option : 4

Q.18 In a certain code language, 'BLUES' is written as 'HVFOY'. How will 'FORCED' be written in that language?

- Ans
- 1. ULIXVW
 - 2. WVXILU
 - 3. WVXJKU
 - 4. XVWLIU

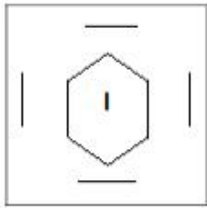
Question ID : 65497843579
Status : Not Answered
Chosen Option : --

Q.19 Select the figure from among the given options that can replace the question mark (?) in the following series.

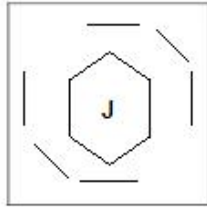


Ans

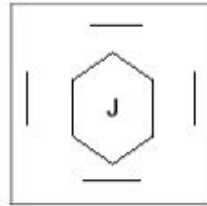
✗ 1.



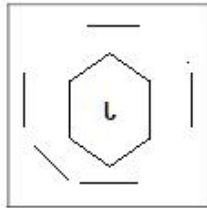
✗ 2.



✓ 3.



✗ 4.



Dots Academy

Question ID : 65497842685

Status : Answered

Chosen Option : 3

Q.20 Select the option that is related to the third number in the same way as the second number is related to the first number.

13 : 1728 :: 17 : ?

Ans ✗ 1. 2043

✗ 2. 1928

✓ 3. 4096

✗ 4. 3218

Question ID : 65497842174

Status : Not Answered

Chosen Option : --

Q.21 Select the number from among the given options that can replace the question mark (?) in the following series.

74, 101, 128, 155, ?

- Ans 1. 210
 2. 182
 3. 198
 4. 173

Question ID : 65497842879
Status : Not Answered
Chosen Option : --

Q.22 In a certain code language, 'MOHAN' is coded as 39-45-24-3-42 and 'KABIR' is coded as 33-3-6-27-54. How will 'RAGHU' be coded in that language?

- Ans 1. 54-3-21-24-63
 2. 36-2-14-24-42
 3. 36-3-14-16-63
 4. 54-2-21-16-42

Question ID : 65497842166
Status : Not Answered
Chosen Option : --

Q.23 Study the given pattern carefully and select the number from among the given options that can replace the question mark (?) in it.

12 36 60
72 3 4 63 4 12 98 ? 15
12 9 14

- Ans 1. 2
 2. 4
 3. 3
 4. 5

Dots Academy

Question ID : 65497842883
Status : Not Answered
Chosen Option : --

Q.24 Introducing Reshma to a guest, a lady, Karishma, said, "She is the daughter of my father-in-law's daughter". How is Reshma related to Karishma?

- Ans 1. Cousin
 2. sister-in-law
 3. Niece
 4. Sister

Question ID : 65497842674
Status : Not Answered
Chosen Option : --

Q.25 Select the combination of letters that when sequentially placed in the blanks of the given series will complete the series.

IMM_ _ILEI_ _OBI_ _IMMO_ _LE

- Ans
- 1. BOLMLIEB
 - 2. OBLMLBIE
 - 3. OBMMLEBI
 - 4. BOMLMEIB

Dots Academy

Question ID : 65497843582
Status : Answered
Chosen Option : 3

Section : General Awareness

Q.1 Who among the following Indian freedom fighters was fondly called Gandhi Buri (Old Lady Gandhi) for her dedication towards Gandhian principles?

- Ans
- 1. Dakshayani Velayudhan
 - 2. Kamla Chaudhary
 - 3. Leela Roy
 - 4. Matangini Hazra

Question ID : 65497844221
Status : Not Answered
Chosen Option : --

Q.2 _____, the world's first sailing boat made entirely from plastic waste, aims to raise people's awareness of plastic pollution in oceans.

- Ans
- 1. Triptropi
 - 2. Flipflopi
 - 3. Blipblopi
 - 4. Snipsnopi

Question ID : 65497842193
Status : Not Answered
Chosen Option : --

Q.3 A distinct 'Dhrupad style' is associated with the _____ gharana.

- Ans
- 1. Ajrada
 - 2. Nathdwara
 - 3. Bishnupur
 - 4. Jafferkhani

Question ID : 65497842893
Status : Not Answered
Chosen Option : --

Q.4 The 61st Amendment to the Constitution of India _____.

Ans 1. substituted 'Odia' for 'Oriya'

2. restricted the size of council of ministers to 15% of the number of legislative members

3. exempted Arunachal Pradesh from reservation for Scheduled Castes in Panchayati Raj institutions

4. reduced the age for voting from 21 to 18 years

Question ID : 65497842712

Status : Not Answered

Chosen Option : --

Q.5 The Hindu Marriage Act was enacted in the year _____.

Ans 1. 1955

2. 1956

3. 1953

4. 1952

Question ID : 65497842206

Status : Not Answered

Chosen Option : --

Q.6 Which of the following is the middle layer in the root apical meristem that gives rise to the cortex?

Ans 1. Plerome

2. Dermatogen

3. Periblem

4. Calyptrogen

Question ID : 65497842700

Status : Not Answered

Chosen Option : --

Q.7 Which of the following is NOT a type of mosquito?

Ans 1. Culex

2. Anopheles

3. Aedes

4. Limulus

Dots Academy

Question ID : 65497844211

Status : Answered

Chosen Option : 4

Q.8 Colloidal systems – such as gum, starch, proteins, cellulose, agar and gelatine – when placed in water, will absorb a large volume of water and swell up. These substances are called _____.

- Ans
- 1. combustibles
 - 2. imbibants
 - 3. porins
 - 4. apoplasts

Dots Academy

Question ID : 65497842899
Status : Not Answered
Chosen Option : --

Q.9 Which of the following is the horizontal distance between two successive crests?

- Ans
- 1. Wave period
 - 2. Wave height
 - 3. Wave length
 - 4. Wave frequency

Question ID : 65497842702
Status : Answered
Chosen Option : 1

Q.10 Which of the following decades was proclaimed by the General Assembly of the United Nations as the International Decade for action on 'Water for life'?

- Ans
- 1. 1972 - 1982
 - 2. 1994 - 2004
 - 3. 2005 - 2015
 - 4. 1983 - 1993

Question ID : 65497842800
Status : Not Answered
Chosen Option : --

Q.11 Finance Minister Nirmala Sitharaman announced the setting up of _____ mega textile parks across the country over three years, in her Budget 2021-22 speech.

- Ans
- 1. nine
 - 2. five
 - 3. seven
 - 4. three

Question ID : 65497842188
Status : Not Answered
Chosen Option : --

Q.12 Which of the following countries hosted the ITTF (International Table Tennis Federation) Women's World Cup 2020?

- Ans 1. Japan
 2. China
 3. South Korea
 4. Singapore

Question ID : 65497844229
Status : Not Answered
Chosen Option : --

Q.13 As per World Justice Project 2020, what is India's rank in Regulatory Enforcement as cited in Economic Survey of India 2021?

- Ans 1. 62
 2. 79
 3. 74
 4. 56

Question ID : 65497842795
Status : Not Answered
Chosen Option : --

Q.14 The Ghoom Monastery is located in:

- Ans 1. Gangtok
 2. Darjeeling
 3. Kalimpong
 4. Namchi

Dots Academy

Question ID : 65497844207
Status : Not Answered
Chosen Option : --

Q.15 Who among the following was named sportsman of the decade (Individual non-Olympic sports) at the 2021 Sportstar ACES Awards?

- Ans 1. Vidit Santosh Gujrathi
 2. Pentala Harikrishna
 3. Baskaran Adhiban
 4. Viswanathan Anand

Question ID : 65497842816
Status : Not Answered
Chosen Option : --

Q.16 Normally, there is a ____ day interval between spring tides and neap tides.

- Ans
- 1. two
 - 2. nine
 - 3. four
 - 4. seven

Question ID : 65497842906
Status : Not Answered
Chosen Option : --

Q.17 Which of the following is NOT a broad mitigation technique of landslide?

- Ans
- 1. Construction of retention wall to stop land from slipping
 - 2. Hazard mapping to locate areas prone to landslides
 - 3. The surface drainage control works to control the movement of landslide along with rain water and spring flows.
 - 4. Reduction in the vegetation cover to arrest landslide

Question ID : 65497844218
Status : Answered
Chosen Option : 4

Q.18 Which of the following British officers issued the infamous 'crawling order' whereby Indians had to crawl on all fours to pass an alley?

- Ans
- 1. General Dyer
 - 2. Warren Hastings
 - 3. Lord Curzon
 - 4. Lord Irwin

Dots Academy

Question ID : 65497842202
Status : Not Answered
Chosen Option : --

Q.19 Gulzar was awarded the 66th Filmfare Award for 'Best Lyrics' for the film ____.

- Ans
- 1. Thappad
 - 2. Ludo
 - 3. Chhapaak
 - 4. Sir

Question ID : 65497842708
Status : Not Answered
Chosen Option : --

Q.20 The ancient city of Champa is believed to be the capital of _____ Mahajanapada.

- Ans
- 1. Vajji
 - 2. Anga
 - 3. Matsya
 - 4. Kashi

Question ID : 65497842907
Status : Not Answered
Chosen Option : --

Q.21 As per the provisions of Union Budget 2021-22, how many public sector banks have been lined up for disinvestment?

- Ans
- 1. Seven
 - 2. Five
 - 3. Two
 - 4. Three

Dots Academy

Question ID : 65497842695
Status : Not Answered
Chosen Option : --

Q.22 Which of the following statements is/are correct?

- I. Gandhi Peace Prize is an annual award instituted by Government of India since 1995.
- II. The award is open to all persons regardless of nationality, race, language, caste, creed or sex.
- III. The Gandhi Peace Prize for the year 2020 was conferred on Bangabandhu Sheikh Mujibur Rahman.

- Ans
- 1. Only I and II
 - 2. Only III
 - 3. I, II and III
 - 4. Only I

Question ID : 65497842811
Status : Not Answered
Chosen Option : --

Q.23 Mridula Sinha, who passed away in November 2020, was the first woman Governor of _____.

- Ans
- 1. Tripura
 - 2. Haryana
 - 3. Goa
 - 4. Mizoram

Question ID : 65497842204
Status : Not Answered
Chosen Option : --

Q.24 According to the Central Ground Water Board, BIS (IS_10500 and revised module IS 10500:2012) specifications in Uniform Drinking Water Quality Monitoring Protocol, what is the acceptable pH value of drinking water specification in India?

- Ans
- 1. 5.5 - 7.5
 - 2. 4.5 - 9.5
 - 3. 3.5 - 5.5
 - 4. 6.5 - 8.5

Question ID : 65497842802
Status : Not Answered
Chosen Option : --

Q.25 The Directive Principles of State Policy in the Constitution of India were borrowed from the _____ Constitution.

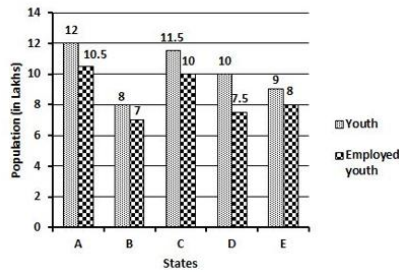
- Ans
- 1. Spanish
 - 2. Norwegian
 - 3. Irish
 - 4. Australian

Question ID : 65497842915
Status : Answered
Chosen Option : 3

Section : Quantitative Aptitude

Q.1 The following bar graph shows the total number of youth (in lakhs) and the number of employed youth (in lakhs) in 5 states A, B, C, D and E.

How many youth (in lakhs) are unemployed in states B and D taken together?



- Ans
- 1. 4.25
 - 2. 3.25
 - 3. 3.5
 - 4. 4.5

Dots Academy

Question ID : 65497842434
Status : Answered
Chosen Option : 3

Q.2 A ladder 18 m long rests against a wall so that the angle between the ladder and the wall is 30° . How far (in m) is the base of the ladder from the wall?

- Ans
- 1. $18\sqrt{3}$
 - 2. $9\sqrt{3}$
 - 3. 18
 - 4. 9

Question ID : 65497842837
Status : Not Answered
Chosen Option : --

Q.3 Simplify $\left[\left(5\frac{1}{4} \div 3\frac{1}{2} \times \frac{5}{12}\right) - \frac{3}{16}\right] \div \left(3\frac{4}{7} \div \frac{5}{14} \text{ of } 6\frac{2}{3}\right) \text{ of } 1\frac{1}{3}$.

- Ans
- 1. $\frac{7}{32}$
 - 2. $\frac{3}{32}$
 - 3. $\frac{17}{32}$
 - 4. $\frac{5}{32}$

Dots Academy

Question ID : 65497842819
Status : Answered
Chosen Option : 3

Q.4 The selling price of a mobile phone is ₹59,620 and it was sold at 8.4% profit. The cost price (in ₹) of the mobile phone is:

- Ans
- 1. 45,000
 - 2. 52,000
 - 3. 55,000
 - 4. 50,000

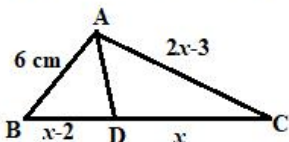
Question ID : 65497842722
Status : Answered
Chosen Option : 3

Q.5 If $a^2 + b^2 = 65$ and $ab = 8$, $a > b > 0$, then find the value of $a^2 - b^2$.

- Ans
- 1. 60
 - 2. 72
 - 3. 65
 - 4. 63

Question ID : 65497842224
Status : Not Answered
Chosen Option : --

Q.6 In the following figure, AD bisects angle BAC. Find the length (in cm) of BD.



- Ans
- 1. 5
 - 2. 6
 - 3. 9
 - 4. 4

Dots Academy

Question ID : 65497842227
Status : Not Answered
Chosen Option : --

Q.7 A solid cone of radius 7 cm and height 7 cm was melted along with two solid spheres of radius 7 cm each to form a solid cylinder of radius 7 cm. What is the curved surface area (in cm^2) of the cylinder?

(Use $\pi = \frac{22}{7}$)

- Ans
- 1. 924
 - 2. 2196
 - 3. 880
 - 4. 482

Question ID : 65497843737
Status : Not Answered
Chosen Option : --

Q.8 A shopkeeper marks an article $x\%$ above the cost price and sells it by allowing 30% discount on the marked price. If there is a loss of 4.8%, then what is the value of x ?

- Ans
- 1. 36
 - 2. 40
 - 3. 30
 - 4. 35

Question ID : 65497844662
Status : Not Answered
Chosen Option : --

Q.9 In the month of March, Dalip earned on an average ₹501 per day. For the first 18 days, his average earning was ₹495 and, for the last 15 days, his average earning was ₹505. On 18th March, he earned ₹50 more than that earned on 17th March. How much (in ₹) did he earn on 18th March?

- Ans**
- 1. 501
 - 2. 500
 - 3. 498
 - 4. 502

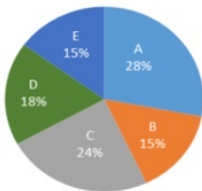
Question ID : 65497843729
Status : **Not Answered**
Chosen Option : --

Q.10 What is the compound interest (in ₹) on a sum of ₹62,500 for 2 years at 12% p.a., if the interest is compounded 8-monthly?

- Ans**
- 1. 13,428
 - 2. 18,342
 - 3. 16,232
 - 4. 16,548

Question ID : 65497842926
Status : **Not Answered**
Chosen Option : --

Q.11 The given pie chart shows the percentage of students in five schools and the table shows the ratio of boys and girls in each school. Study the pie chart and table and answer the question that follows.



The below table shows the ratio of girls and boys in the given five schools.

School	Girls : Boys
A	3 : 4
B	2 : 3
C	5 : 3
D	1 : 2
E	4 : 1

The number of girls in school D is what percentage less than the number of boys in school B (correct to the nearest integer)?

- Ans**
- 1. 27%
 - 2. 35%
 - 3. 19%
 - 4. 33%

Question ID : 65497844355
Status : **Not Answered**
Chosen Option : --

Dots Academy

Q.12 AB and CD are two chords in a circle with centre O and AD is the diameter. When produced, AB and CD meet at the point P. If $\angle DAP = 27^\circ$, $\angle APD = 35^\circ$, then what is the measure (in degrees) of $\angle DBC$?

- Ans
- 1. 30
 - 2. 26
 - 3. 28
 - 4. 32

Question ID : **65497844246**
Status : **Not Answered**
Chosen Option : --

Q.13 Two trains are running on parallel tracks in the same direction at the speed of 80 km/h and 90 km/h, respectively. The trains crossed each other in 3 minutes. If the length of one train is 230 m, then what is the length (in m) of the other train?

- Ans
- 1. 250
 - 2. 230
 - 3. 270
 - 4. 300

Dots Academy

Question ID : **65497842221**
Status : **Not Answered**
Chosen Option : --

Q.14 A and B entered into a partnership with investments in the ratio 3 : 5. After a few months, A withdrew and collected back his money. At the end of the year, they received profit in the ratio 2 : 5. After how many months did A withdraw?

- Ans
- 1. 9
 - 2. 7
 - 3. 8
 - 4. 6

Question ID : **65497842218**
Status : **Answered**
Chosen Option : **3**

Q.15 If $x^4 - 79x^2 + 1 = 0$, then a value of $x + x^{-1}$ can be:

- Ans
- 1. 8
 - 2. 7
 - 3. 5
 - 4. 9

Question ID : **65497842728**
Status : **Not Answered**
Chosen Option : --

Q.16 In $\triangle ABC$, the perpendiculars drawn from A, B and C meet the opposite sides at points D, E and F, respectively. AD, BE and CF intersect at point P. If $\angle EPD = 110^\circ$ and the bisectors of $\angle A$ and $\angle B$ meet at point Q, then $\angle AQB = ?$

- Ans
- 1. 110°
 - 2. 135°
 - 3. 115°
 - 4. 125°

Question ID : **65497842733**
Status : **Not Answered**
Chosen Option : --

Q.17 AB is the diameter of a circle with centre O. C and D are two points on the circle on either side of AB, such that $\angle CAB = 52^\circ$ and $\angle ABD = 47^\circ$. What is the difference (in degrees) between the measures of $\angle CAD$ and $\angle CBD$?

- Ans
- 1. 15
 - 2. 10
 - 3. 25
 - 4. 20

Dots Academy

Question ID : **65497842932**
Status : **Not Answered**
Chosen Option : --

Q.18 What is the sum of the numbers between 400 and 500 such that when they are divided by 6, 12 and 16, it leaves no remainder?

- Ans
- 1. 1024
 - 2. 960
 - 3. 912
 - 4. 480

Question ID : **65497842818**
Status : **Not Answered**
Chosen Option : --

Q.19 A tyre has two punctures. The first puncture alone would have made the tyre flat in 45 minutes, and the second puncture alone would have done it in 90 minutes. If air leaks out at a constant rate, then how long (in minutes) does it take for both the punctures together to make the tyre flat?

- Ans
- 1. 30
 - 2. 45
 - 3. 40
 - 4. 15

Question ID : **65497842725**
Status : **Not Answered**
Chosen Option : --

Q.20 If $\frac{\sin^2\theta - 3\sin\theta + 2}{\cos^2\theta} = 1$, where $0^\circ < \theta < 90^\circ$, then what is the value of $(\cos 2\theta - \sin 3\theta + \operatorname{cosec} 2\theta)$?

Ans

✓ 1. $\frac{-3 + 4\sqrt{3}}{6}$

✗ 2. $\frac{3 - 4\sqrt{3}}{6}$

✗ 3. $\frac{-3 - 4\sqrt{3}}{6}$

✗ 4. $\frac{3 + 4\sqrt{3}}{6}$

Dots Academy

Question ID : 65497842735

Status : Not Answered

Chosen Option : --

Q.21 If $\operatorname{cosec} A = \sec B$, where A and B are acute angles, then what is the value of $(A + B)$?

Ans

✓ 1. 90°

✗ 2. 45°

✗ 3. 0°

✗ 4. 135°

Question ID : 65497842229

Status : Answered

Chosen Option : 1

Q.22 A person's salary was increased by 50% and subsequently decreased by 50%. How much percentage does he lose or gain?

Ans

✗ 1. Loss of 30%

✗ 2. Gain of 50%

✓ 3. Loss of 25%

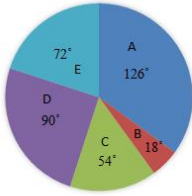
✗ 4. Gain of 20%

Question ID : 65497844236

Status : Answered

Chosen Option : 3

Q.23 The breakup of the total number of employees of a company working in different offices (A to E), in degrees, is given in the pie chart. Total number of employees = 2400.



If the percentage of male employees in office C is 20% and that of female employees in E is 40%, then what is the ratio of the numbers of female employees in E to that of female employees in C?

- Ans**
- 1. 3 : 2
 - 2. 3 : 8
 - 3. 2 : 3
 - 4. 5 : 4

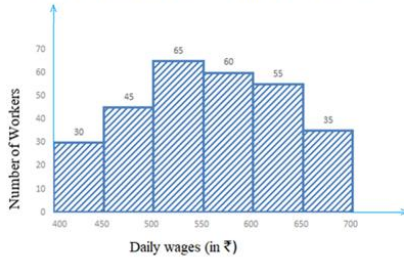
Question ID : 65497842839
 Status : Not Answered
 Chosen Option : --

Q.24 If a nine-digit number $485x3678y$ is divisible by 72, then for the smallest value of x , the value of $(2y - 3x)$ is:

- Ans**
- 1. 9
 - 2. 11
 - 3. 6
 - 4. 8

Question ID : 65497844231
 Status : Not Answered
 Chosen Option : --

Q.25 Study the graph and answer the question that follows.



What is the ratio of the total number of workers whose daily wages are less than ₹450 to the total number of workers whose daily wages are ₹650 and above?

- Ans**
- 1. 5 : 7
 - 2. 3 : 5
 - 3. 6 : 7
 - 4. 1 : 4

Dots Academy

Question ID : 65497842942
 Status : Not Answered
 Chosen Option : --

Q.1 Select the option that can be used as a one-word substitute for the given group of words.

A person who works in a shop that sells cut flowers and plants

- Ans
- 1. Hawker
 - 2. Dealer
 - 3. Florist
 - 4. Vendor

Question ID : 65497842258
Status : Answered
Chosen Option : 3

Q.2 Select the option that expresses the given sentence in active voice.

Tall promises were being made by each promoter.

- Ans
- 1. Each promoter has made tall promises.
 - 2. Each promoter made tall promises.
 - 3. Each promoter was making tall promises.
 - 4. Each promoter has been making tall promises.

Dots Academy

Question ID : 65497842241
Status : Answered
Chosen Option : 3

Q.3 Select the most appropriate ANTONYM of the given word.

Proclaim

- Ans
- 1. Exhibit
 - 2. Evince
 - 3. Announce
 - 4. Conceal

Question ID : 65497842962
Status : Answered
Chosen Option : 4

Q.4 Select the most appropriate synonym of the given word.

Livid

- Ans
- 1. Closed
 - 2. Clear
 - 3. Furious
 - 4. Pale

Question ID : 65497842253
Status : Not Attempted and
Marked For Review
Chosen Option : --

Q.5 Select the most appropriate meaning of the given idiom.

Cold comfort

- Ans 1. Enjoyment in the hills
 2. Very little satisfaction
 3. Very soothing
 4. Unbearable weather

Question ID : 65497844276
Status : Marked For Review
Chosen Option : 2

Q.6 The following sentence has been split into segments. One of them may contain an error. Identify the segment that contains a grammatical error. If you don't find any error, mark 'No error' as your answer.

Among you and me / she is quite rude / to the boy.

- Ans 1. Among you and me
 2. No error
 3. to the boy
 4. she is quite rude

Question ID : 65497842238
Status : Answered
Chosen Option : 1

Q.7 Select the option that expresses the given sentence in indirect speech.

He said to me, "Do you own this beautiful car?"

- Ans 1. He asked me if I owned that beautiful car.
 2. He asked me did I own that beautiful car.
 3. He asked me that if you owned this beautiful car.
 4. He asked to me if you own that beautiful car.

Question ID : 65497842955
Status : Answered
Chosen Option : 1

Q.8 Select the option that will improve the underlined part of the given sentence. In case no improvement is needed, select 'No improvement'.

You are so far the bright student in the class.

- Ans 1. by so far the brighter
 2. so far most bright
 3. by far the brightest
 4. No improvement

Dots Academy

Question ID : 65497844269
Status : Answered
Chosen Option : 3

Q.9 The following sentence has been split into four segments. Identify the segment that contains a grammatical error.

Shall / we go / for walking / in the park?

- Ans 1. for walking
 2. in the park
 3. Shall
 4. we go

Question ID : 65497843044
Status : Answered
Chosen Option : 1

Q.10 Given below are four jumbled sentences. Select the option that gives their correct order.

- A. Expert mechanics labored over the plane for three hours.
B. A small nut had fallen into a channel which prevented the gear from moving.
C. A huge plane was forced to crash land when its landing gear got stuck.
D. They were amazed when they discovered what had caused the mechanical failure.

- Ans 1. ACBD
 2. CADB
 3. DBAC
 4. BADC

Question ID : 65497842857
Status : Answered
Chosen Option : 2

Q.11 Select the most appropriate option to fill in the blank.

Can you arrange for the consignment _____ delivered on Monday?

- Ans 1. for being
 2. being
 3. is
 4. to be

Dots Academy

Question ID : 65497842766
Status : Answered
Chosen Option : 4

Q.12 Select the most appropriate ANTONYM of the given word.

Refined

- Ans 1. Miserly
 2. Crude
 3. Genteel
 4. Precise

Question ID : 65497844274
Status : Not Answered
Chosen Option : --

Q.13 The following sentence has been divided into parts. One of them may contain an error. Select the part that contains the error from the given options. If you don't find any error, mark 'No error' as your answer.

Vivek should be excited / on the promotion / he's got.

- Ans
- 1. he's got
 - 2. Vivek should be excited
 - 3. No error
 - 4. on the promotion

Question ID : 65497843549
Status : Answered
Chosen Option : 1

Q.14 Select the most appropriate synonym of the given word.

Amusement

- Ans
- 1. Gloom
 - 2. Despair
 - 3. Boredom
 - 4. Pleasure

Question ID : 65497842858
Status : Answered
Chosen Option : 4

Q.15 Select the most appropriate meaning of the given idiom.

Feast one's eyes on

- Ans
- 1. Notice something alarming
 - 2. Gaze at something with pleasure
 - 3. Arrange a delicious meal
 - 4. Prepare a rare delicacy

Dots Academy

Question ID : 65497842964
Status : Marked For Review
Chosen Option : 2

Q.16 Select the option that can be used as a one-word substitute for the given group of words.

Policy of racial discrimination

- Ans
- 1. Commonwealth
 - 2. Apartheid
 - 3. Diplomacy
 - 4. Non-alignment

Question ID : 65497842764
Status : Not Answered
Chosen Option : --

Q.17 The following sentence has been split into four segments. Identify the segment that contains a grammatical error.

I do not / like to read / these kind / of novels.

- Ans 1. these kind
 2. like to read
 3. of novels
 4. I do not

Question ID : 65497842946
Status : Answered
Chosen Option : 1

Q.18 Select the INCORRECTLY spelt word.

- Ans 1. Altarnate
 2. Allotted
 3. Allergic
 4. Alphabet

Question ID : 65497842260
Status : Answered
Chosen Option : 1

Q.19 Select the option that will improve the underlined part of the given sentence. In case no improvement is needed, select 'No improvement'.

We had to undergo a great many difficulties.

- Ans 1. great many difficulties
 2. a great many difficulty
 3. much great difficulties
 4. No improvement

Dots Academy

Question ID : 65497842856
Status : Answered
Chosen Option : 1

Q.20 Select the option that expresses the given sentence in passive voice.

She is looking after the old ladies with great affection.

- Ans 1. The old ladies are being looked after with great affection.
 2. The old ladies were looked after with great affection.
 3. She is looked after with great affection by the old ladies.
 4. The old ladies are looked after with great affection.

Question ID : 65497842846
Status : Answered
Chosen Option : 1

Comprehension:

In the following passage, some words have been deleted. Read the passage carefully and select the most appropriate option to fill in each blank.

Dance as an artistic form of (1) _____ is extremely old. Evidence of dance as a (2) _____ form is available in ancient literary texts, painting and sculpture. (3) _____ of the dance forms trace their roots to the (4) _____ of movement codified in the Natya Shastra (5) _____ by Bharat Muni.

SubQuestion No : 21

Q.21 Select the most appropriate option to fill in blank no.1.

- Ans 1. succession
 2. impression
 3. suggestion
 4. expression

Question ID : 65497842748

Status : Answered

Chosen Option : 4

Comprehension:

In the following passage, some words have been deleted. Read the passage carefully and select the most appropriate option to fill in each blank.

Dance as an artistic form of (1) _____ is extremely old. Evidence of dance as a (2) _____ form is available in ancient literary texts, painting and sculpture. (3) _____ of the dance forms trace their roots to the (4) _____ of movement codified in the Natya Shastra (5) _____ by Bharat Muni.

SubQuestion No : 22

Q.22 Select the most appropriate option to fill in blank no.2.

- Ans 1. created
 2. creative
 3. creating
 4. creation

Dots Academy

Question ID : 65497842749

Status : Answered

Chosen Option : 2

Comprehension:

In the following passage, some words have been deleted. Read the passage carefully and select the most appropriate option to fill in each blank.

Dance as an artistic form of (1) _____ is extremely old. Evidence of dance as a (2) _____ form is available in ancient literary texts, painting and sculpture. (3) _____ of the dance forms trace their roots to the (4) _____ of movement codified in the Natya Shastra (5) _____ by Bharat Muni.

SubQuestion No : 23

Q.23 Select the most appropriate option to fill in blank no.3.

- Ans
- 1. Any
 - 2. Much
 - 3. Many
 - 4. More

Question ID : **65497842750**
Status : **Marked For Review**
Chosen Option : 2

Comprehension:

In the following passage, some words have been deleted. Read the passage carefully and select the most appropriate option to fill in each blank.

Dance as an artistic form of (1) _____ is extremely old. Evidence of dance as a (2) _____ form is available in ancient literary texts, painting and sculpture. (3) _____ of the dance forms trace their roots to the (4) _____ of movement codified in the Natya Shastra (5) _____ by Bharat Muni.

SubQuestion No : 24

Q.24 Select the most appropriate option to fill in blank no.4.

- Ans
- 1. delivery
 - 2. capacity
 - 3. procedure
 - 4. techniques

Dots Academy

Question ID : **65497842751**
Status : **Answered**
Chosen Option : 4

Comprehension:

In the following passage, some words have been deleted. Read the passage carefully and select the most appropriate option to fill in each blank.

Dance as an artistic form of (1) _____ is extremely old. Evidence of dance as a (2) _____ form is available in ancient literary texts, painting and sculpture. (3) _____ of the dance forms trace their roots to the (4) _____ of movement codified in the Natya Shastra (5) _____ by Bharat Muni.

SubQuestion No : 25

Q.25 Select the most appropriate option to fill in blank no.5.

- Ans
- 1. disbursed
 - 2. captured
 - 3. compiled
 - 4. dispersed

Dots Academy

Question ID : **65497842752**

Status : **Answered**

Chosen Option : **3**